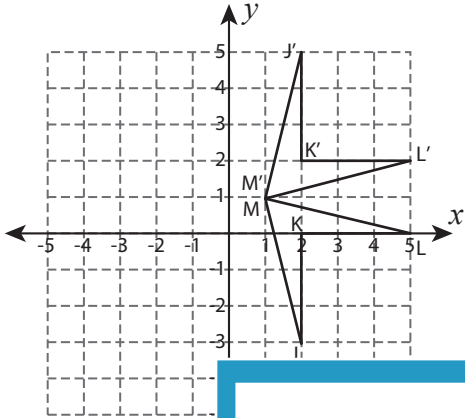


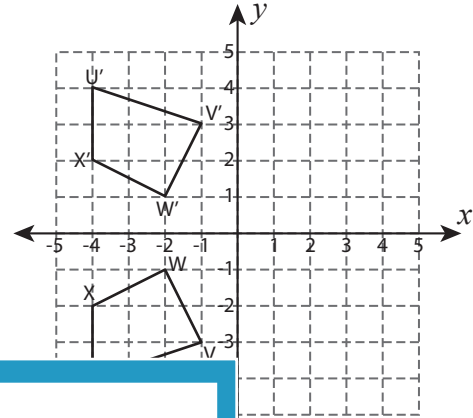
# Reflection of Shapes

Write a rule to describe each reflection.

1)



2)



3)

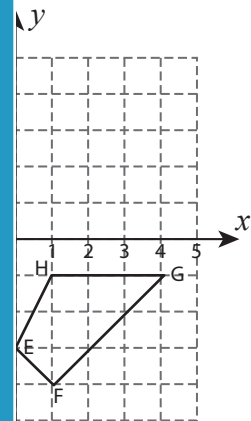


**PREVIEW**  
Gain complete access to the largest collection of worksheets in all subjects!

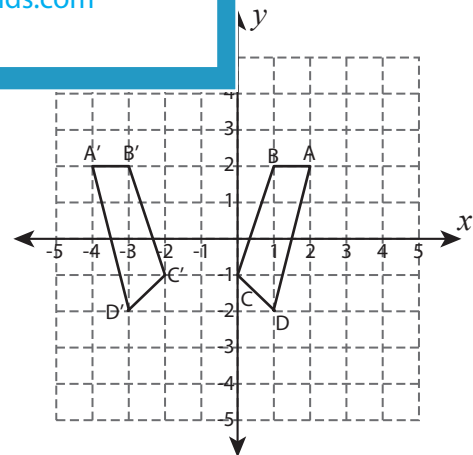
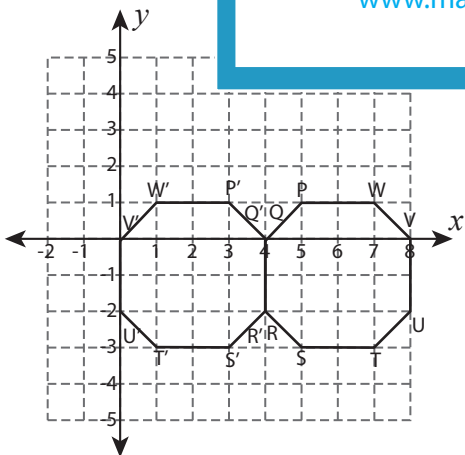
Members, please log in to download this worksheet.

Not a member? Please sign up to gain complete access.

[www.mathworksheets4kids.com](http://www.mathworksheets4kids.com)



5)

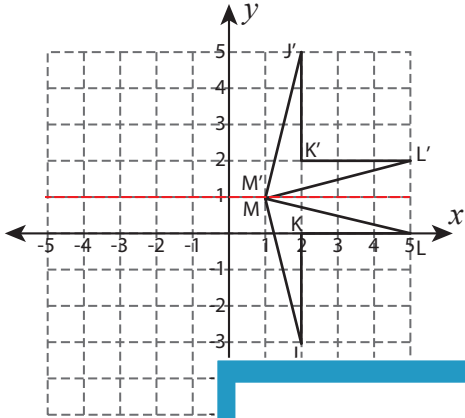


**Answer key**

**Reflection of Shapes**

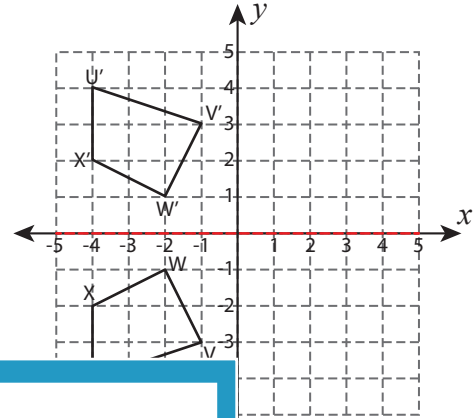
Write a rule to describe each reflection.

1)



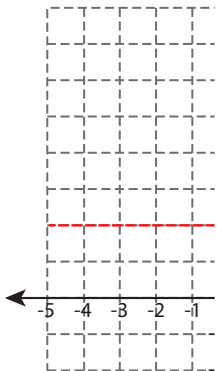
Reflection across the line  $y = 1$

2)



Reflection across the x-axis

3)



Reflection across the line  $y = -1$

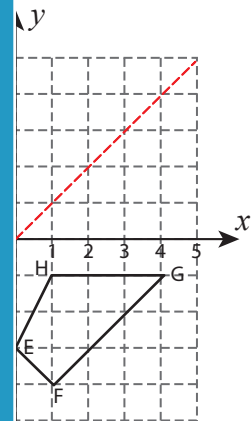
**PREVIEW**

Gain complete access to the largest collection of worksheets in all subjects!

Members, please log in to download this worksheet.

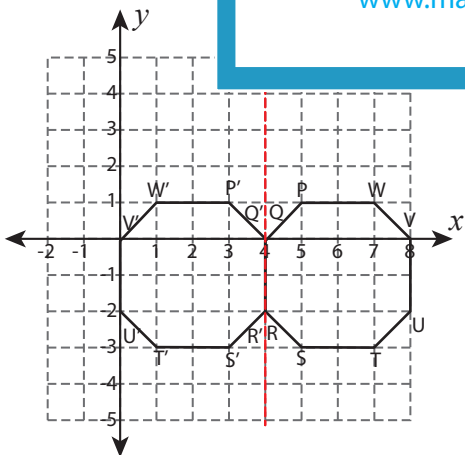
Not a member? Please sign up to gain complete access.

[www.mathworksheets4kids.com](http://www.mathworksheets4kids.com)

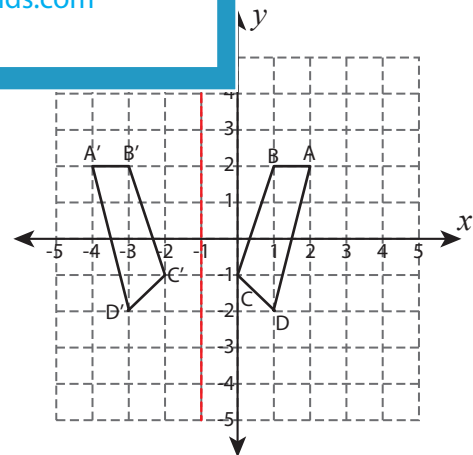


Reflection across the line  $y = x$

5)



Reflection across the line  $x = 4$



Reflection across the line  $x = -1$