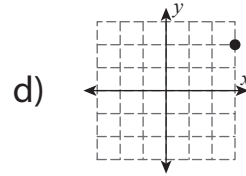
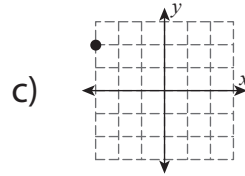
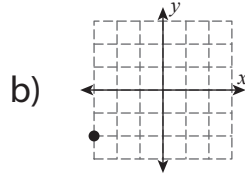
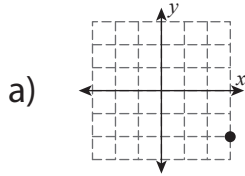
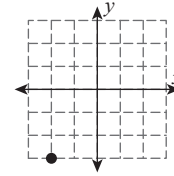
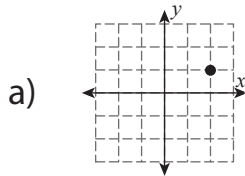
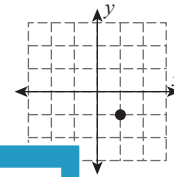


**Multiple Choice**

1) What will be the new position of the given point after rotating  $90^\circ$  counterclockwise about the origin?



2) What will be the new position of the given point after rotating  $180^\circ$  about the origin?



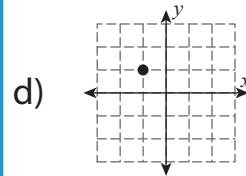
**PREVIEW**

Gain complete access to the largest collection of worksheets in all subjects!

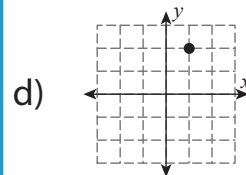
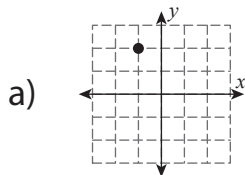
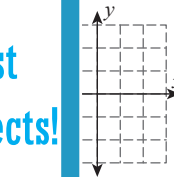
Members, please log in to download this worksheet.

Not a member? Please sign up to gain complete access.

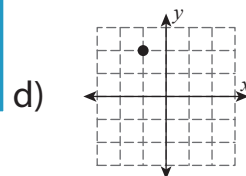
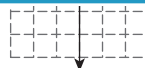
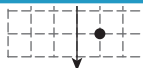
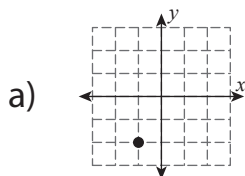
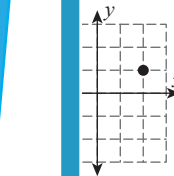
[www.mathworksheets4kids.com](http://www.mathworksheets4kids.com)



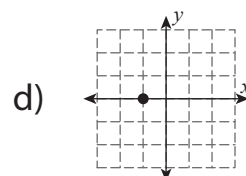
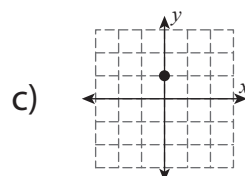
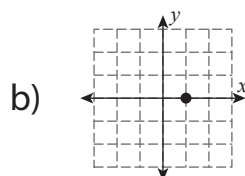
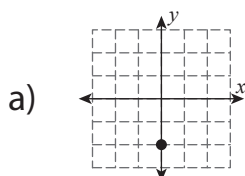
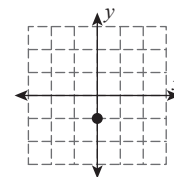
3) What will be the new position of the given point after rotating  $90^\circ$  clockwise about the origin?



4) What will be the new position of the given point after rotating  $90^\circ$  clockwise about the origin?

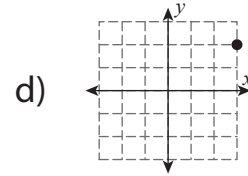
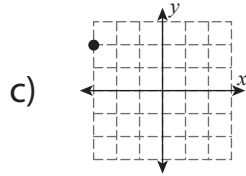
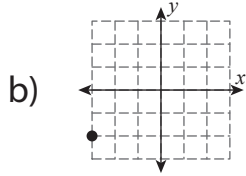
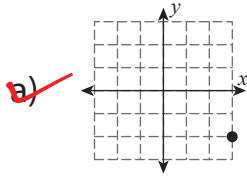
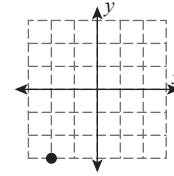


5) What will be the new position of the given point after rotating  $180^\circ$  about the origin?

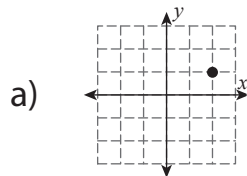
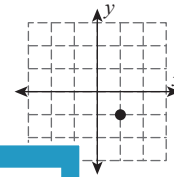


**Multiple Choice**

1) What will be the new position of the given point after rotating  $90^\circ$  counterclockwise about the origin?



2) What will be the new position of the given point after rotating  $180^\circ$  about the origin?



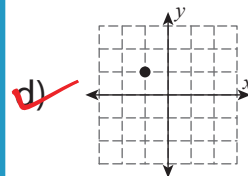
**PREVIEW**

Gain complete access to the largest collection of worksheets in all subjects!

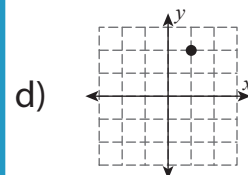
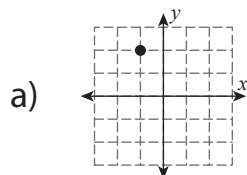
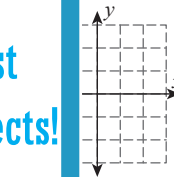
Members, please log in to download this worksheet.

Not a member? Please sign up to gain complete access.

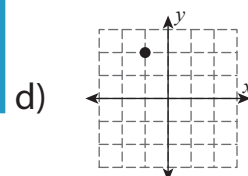
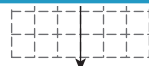
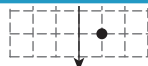
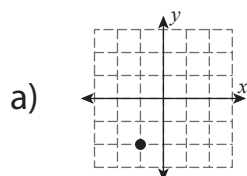
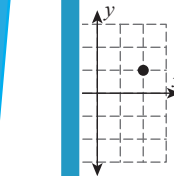
[www.mathworksheets4kids.com](http://www.mathworksheets4kids.com)



3) What will be the new position of the given point after rotating  $90^\circ$  clockwise about the origin?



4) What will be the new position of the given point after rotating  $90^\circ$  clockwise about the origin?



5) What will be the new position of the given point after rotating  $180^\circ$  about the origin?

