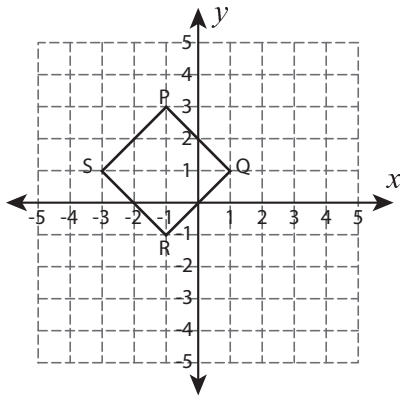


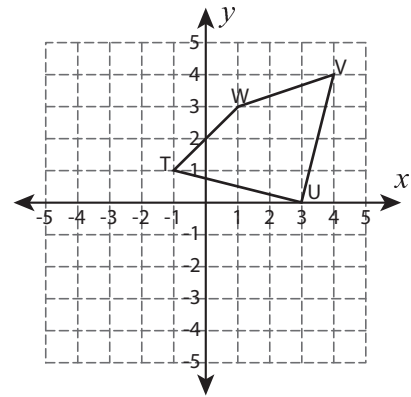
Rotate the Quadrilaterals

Graph the image of each quadrilateral after rotating it about the origin.

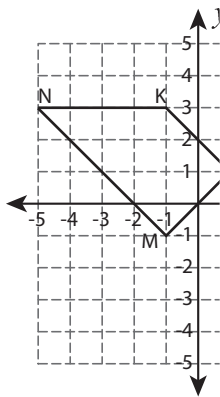
1) 90° clockwise rotation



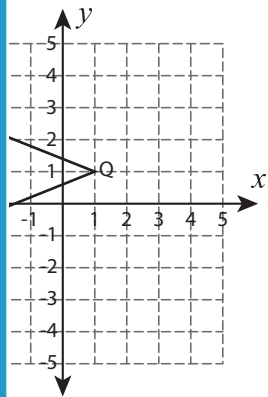
2) 90° counterclockwise rotation



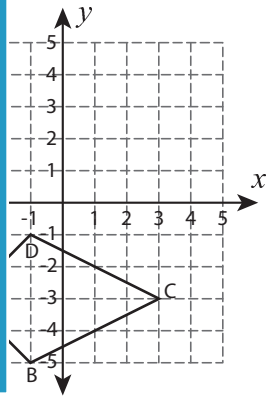
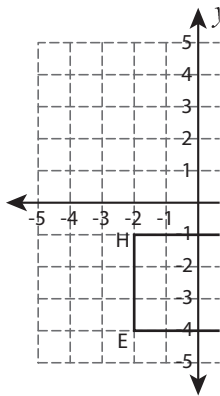
3) 180° rotation



rotation



5) 90° counterclockwise rotation



PREVIEW

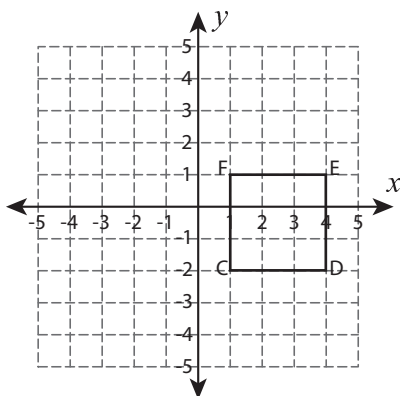
Gain complete access to the largest collection of worksheets in all subjects!

Members, please
log in to
download this
worksheet.

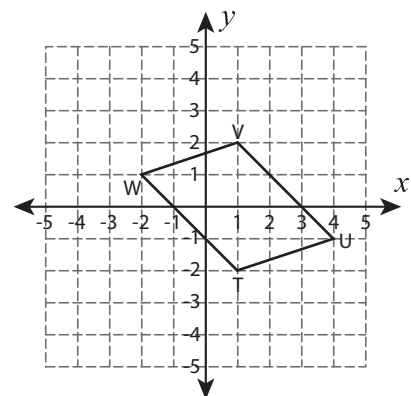
Not a member?
Please sign up to
gain complete
access.

www.mathworksheets4kids.com

7) 90° clockwise rotation



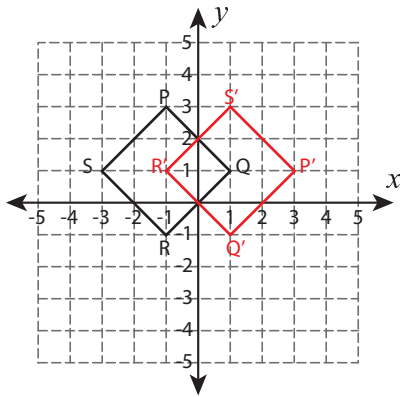
8) 90° counterclockwise rotation



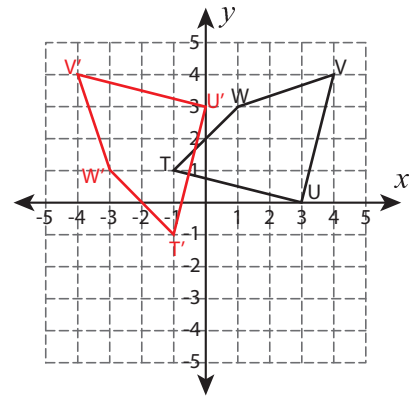
Rotate the Quadrilaterals

Graph the image of each quadrilateral after rotating it about the origin.

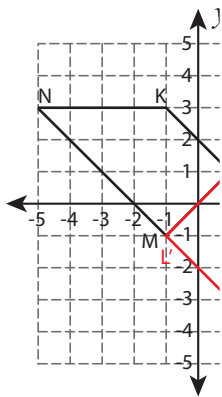
1) 90° clockwise rotation



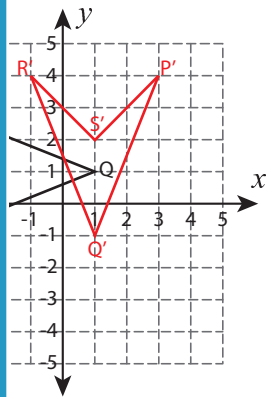
2) 90° counterclockwise rotation



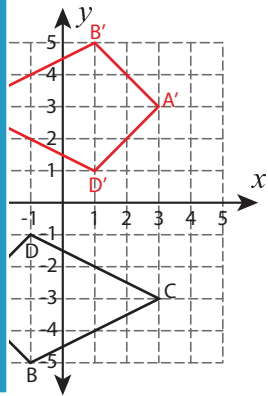
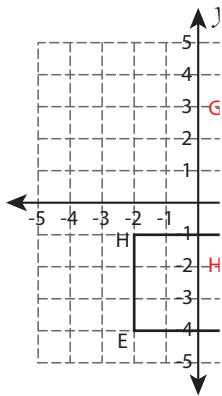
3) 180° rotation



rotation



5) 90° counterclockwise rotation



PREVIEW

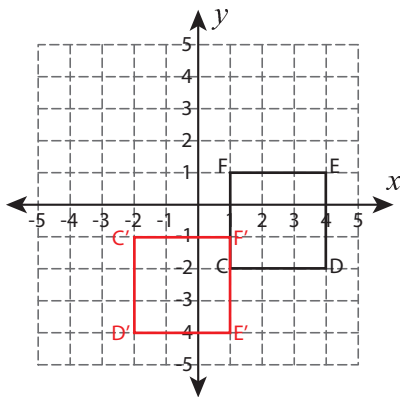
Gain complete access to the largest collection of worksheets in all subjects!

Members, please log in to download this worksheet.

Not a member? Please sign up to gain complete access.

www.mathworksheets4kids.com

7) 90° clockwise rotation



8) 90° counterclockwise rotation

