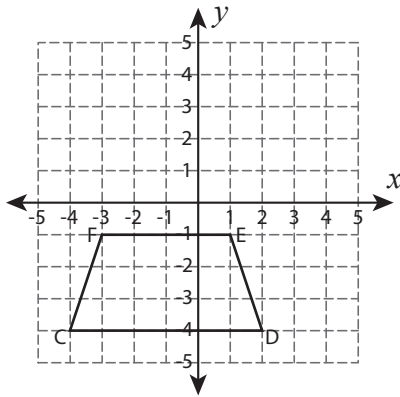


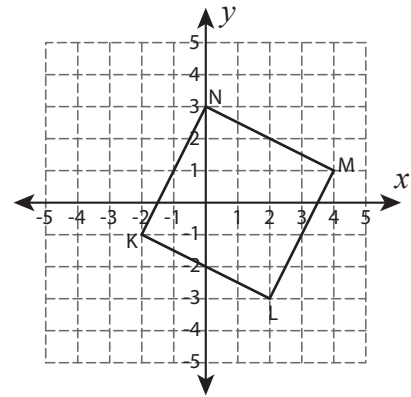
# Rotate the Quadrilaterals

Graph the image of each quadrilateral after rotating it about the origin.

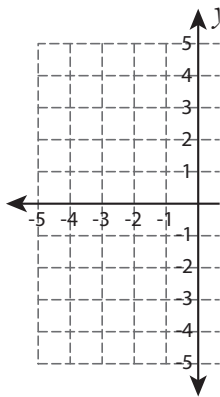
1)  $90^\circ$  counterclockwise rotation



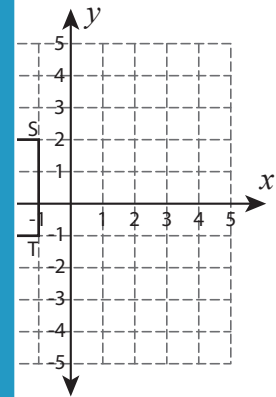
2)  $180^\circ$  rotation



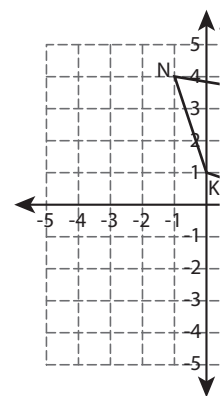
3)  $90^\circ$  clockwise rotation



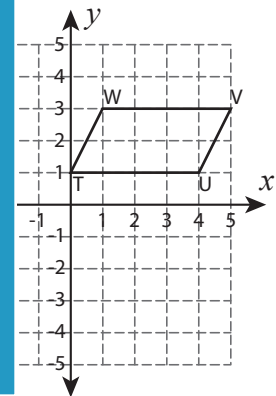
4)  $90^\circ$  counterclockwise rotation



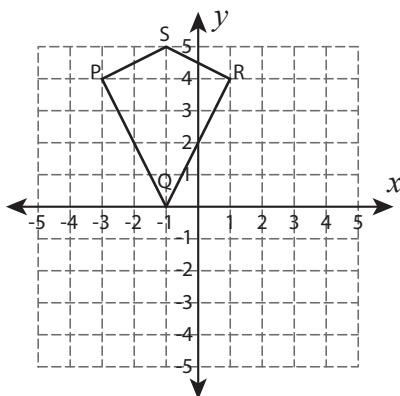
5)  $180^\circ$  rotation



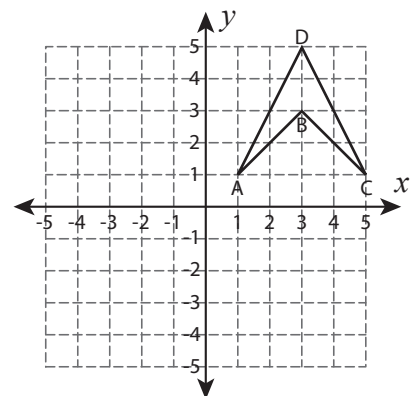
6)  $90^\circ$  clockwise rotation



7)  $90^\circ$  counterclockwise rotation



8)  $180^\circ$  rotation



# PREVIEW

Gain complete access to the largest collection of worksheets in all subjects!

Members, please log in to download this worksheet.

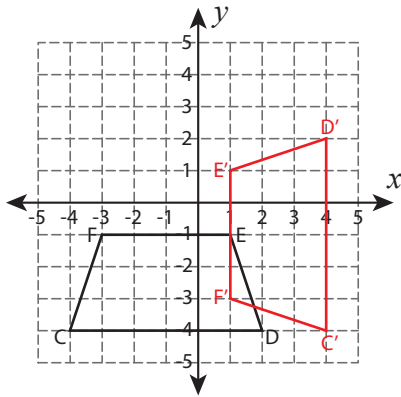
Not a member? Please sign up to gain complete access.

[www.mathworksheets4kids.com](http://www.mathworksheets4kids.com)

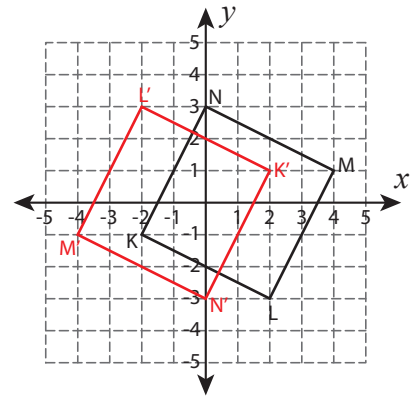
**Rotate the Quadrilaterals**

Graph the image of each quadrilateral after rotating it about the origin.

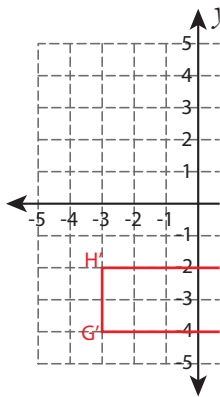
1)  $90^\circ$  counterclockwise rotation



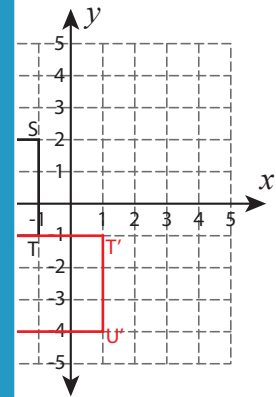
2)  $180^\circ$  rotation



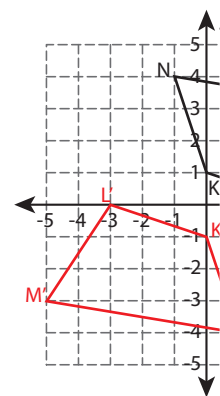
3)  $90^\circ$  clockwise rotation



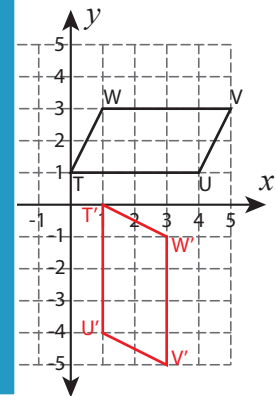
4)  $90^\circ$  counterclockwise rotation



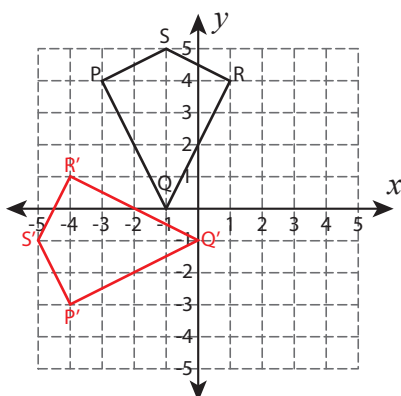
5)  $180^\circ$  rotation



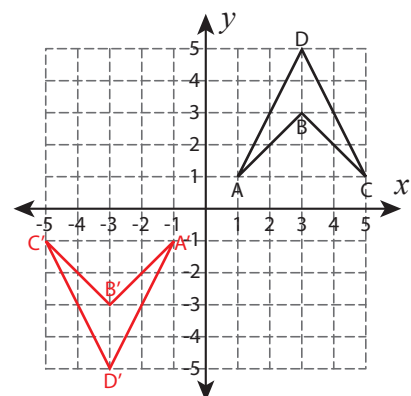
6)  $90^\circ$  clockwise rotation



7)  $90^\circ$  counterclockwise rotation



8)  $180^\circ$  rotation



**PREVIEW**

Gain complete access to the largest collection of worksheets in all subjects!

Members, please log in to download this worksheet.

Not a member? Please sign up to gain complete access.

[www.mathworksheets4kids.com](http://www.mathworksheets4kids.com)