




**Slide, Flip or Turn - MCQ**

Choose if the figure shown below has been flipped, turned or slid.

1)   a) Slide    b) Flip    c) Turn

2)   a) Flip    b) Turn    c) Slide

3)   a) Turn    b) Slide    c) Flip

4)   a) Turn    b) Slide    c) Flip

5)   a) Turn    b) Flip    c) Turn

6)   a) Turn    b) Slide    c) Flip

**PREVIEW**

Gain complete access to the largest collection of worksheets in all subjects!

Members, please log in to download this worksheet.

Not a member? Please sign up to gain complete access.

[www.mathworksheets4kids.com](http://www.mathworksheets4kids.com)