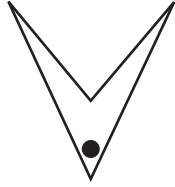
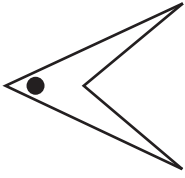


Slide, Flip or Turn - MCQ

Sheet 2

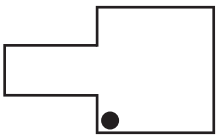
Choose if the figure shown below has been flipped, turned or slid.

1)



- a) Flip b) Turn c) Slide

2)



- a) Turn b) Slide c) Flip

3)



PREVIEW

Gain complete access to the largest collection of worksheets in all subjects!

- a) Turn b) Flip c) Turn

4)



Members, please log in to download this worksheet.

Not a member? Please sign up to gain complete access.

www.mathworksheets4kids.com


- a) Turn b) Turn c) Slide

5)



- a) Turn b) Slide c) Flip

6)



- a) Turn b) Flip c) Slide