

Slide, Flip or Turn - MCQ

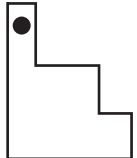

Choose if the figure shown below has been flipped, turned or slid.

1)   a) Turn b) Slide c) Flip

2)   a) Slide b) Flip c) Turn

3)  a) Turn b) Slide c) Turn

4)  a) Turn b) Slide c) Slide

5)   a) Turn b) Slide c) Flip

6)   a) Flip b) Slide c) Turn

PREVIEW

Gain complete access to the largest collection of worksheets in all subjects!

Members, please log in to download this worksheet.

Not a member? Please sign up to gain complete access.

www.mathworksheets4kids.com

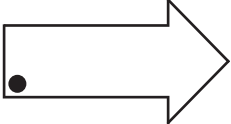

Answer key

Slide, Flip or Turn - MCQ

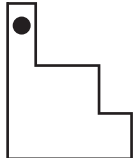

Choose if the figure shown below has been flipped, turned or slid.

1)   a) Turn b) Slide c) Flip

2)   a) Slide b) Flip c) Turn

3)   a) Slide b) Turn c) Flip

4)   a) Turn b) Flip c) Slide

5)   a) Turn b) Flip c) Flip

6)   a) Flip b) Slide c) Turn

PREVIEW

Gain complete access to the largest collection of worksheets in all subjects!

Members, please log in to download this worksheet.

Not a member? Please sign up to gain complete access.

www.mathworksheets4kids.com