

Name : \_\_\_\_\_

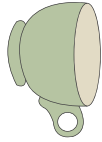
Score : \_\_\_\_\_

# Slide, Flip or Turn

Sheet 1

Recognize how each figure has moved. Write slide, flip or turn.

1)



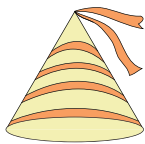
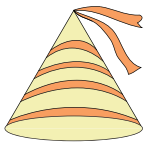
\_\_\_\_\_

2)



\_\_\_\_\_

3)



\_\_\_\_\_

4)



\_\_\_\_\_

5)




\_\_\_\_\_

6)



\_\_\_\_\_

7)



\_\_\_\_\_

8)



\_\_\_\_\_