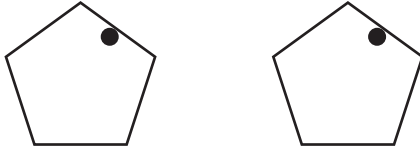


Slide, Flip or Turn - Shapes

Sheet 1

Recognize how each shape has moved. Write slide, flip or turn.

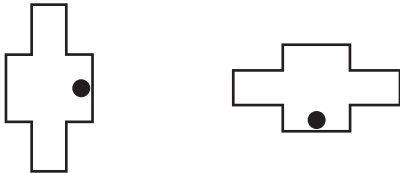
1)



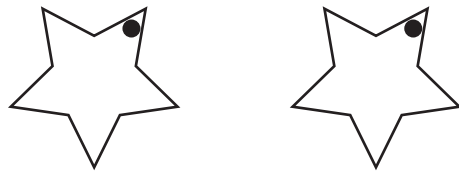
2)



3)



4)



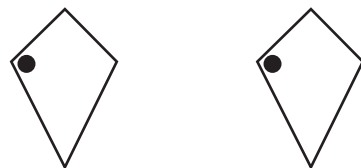
5)



6)



7)



8)