

**Slide, Flip or Turn - Shapes**

Recognize how each shape has moved. Write slide, flip or turn.

1)



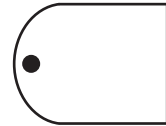
\_\_\_\_\_

2)



\_\_\_\_\_

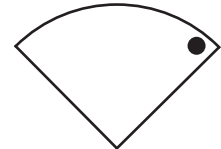
3)



\_\_\_\_\_

\_\_\_\_\_

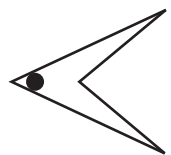
5)



\_\_\_\_\_

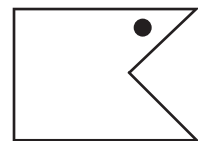
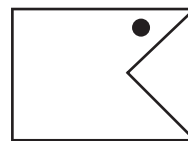
\_\_\_\_\_

7)



\_\_\_\_\_

8)



\_\_\_\_\_

# PREVIEW

Gain complete access to the largest collection of worksheets in all subjects!

Members, please log in to download this worksheet.

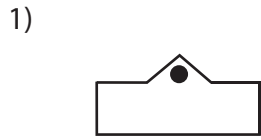
Not a member? Please sign up to gain complete access.

[www.mathworksheets4kids.com](http://www.mathworksheets4kids.com)

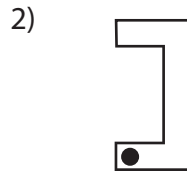
**Answer key**

**Slide, Flip or Turn - Shapes**

Recognize how each shape has moved. Write slide, flip or turn.



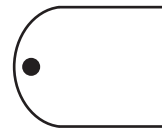
**turn**



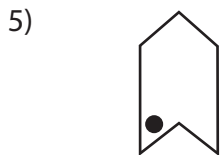
**slide**



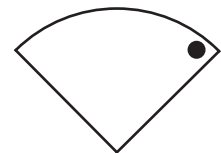
**flip**



**turn**



**slide**



**turn**

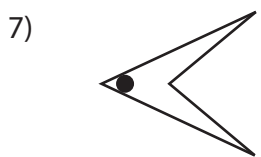
# PREVIEW

Gain complete access to the largest collection of worksheets in all subjects!


Members, please log in to download this worksheet.

Not a member? Please sign up to gain complete access.

www.mathworksheets4kids.com



**turn**



**slide**

