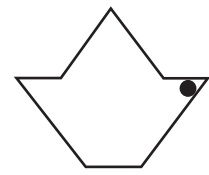
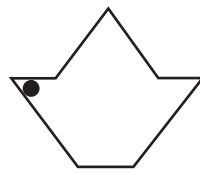
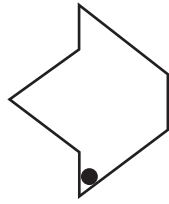
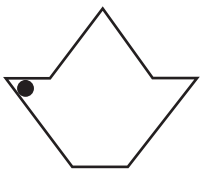


**Slide, Flip and Turn**

Recognize how each figure has moved. Write slide, flip and turn below the respective images.

1)

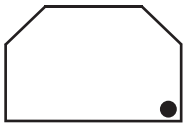


\_\_\_\_\_

\_\_\_\_\_

\_\_\_\_\_

2)



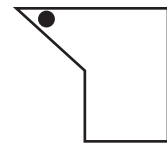
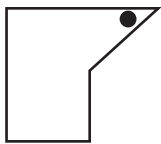
\_\_\_\_\_

3)



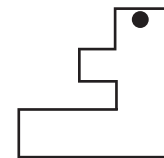
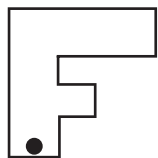
\_\_\_\_\_

4)



\_\_\_\_\_

5)

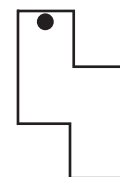
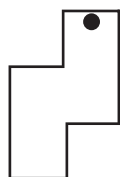
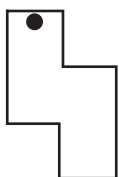


\_\_\_\_\_

\_\_\_\_\_

\_\_\_\_\_

6)



\_\_\_\_\_

\_\_\_\_\_

\_\_\_\_\_

# PREVIEW

Gain complete access to the largest collection of worksheets in all subjects!

Members, please log in to download this worksheet.

Not a member? Please sign up to gain complete access.

www.mathworksheets4kids.com