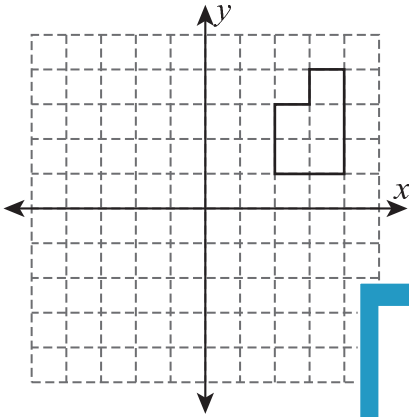


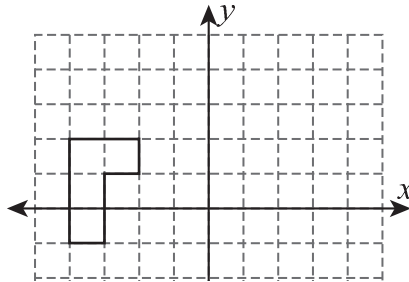
Translation of Shapes

Graph the image of each shape using the translation given.

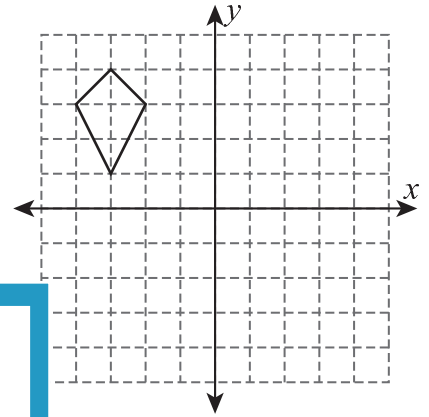
1) 6 units left and 1 unit up



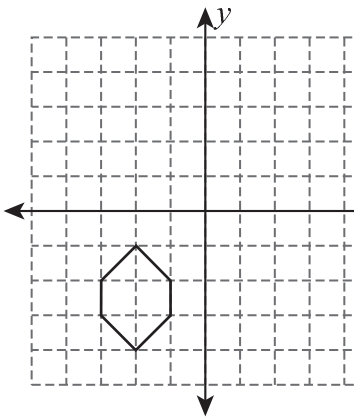
2) 2 units right and 4 units down



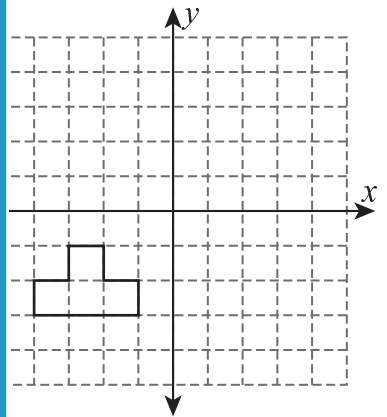
3) 3 units down and 5 units right



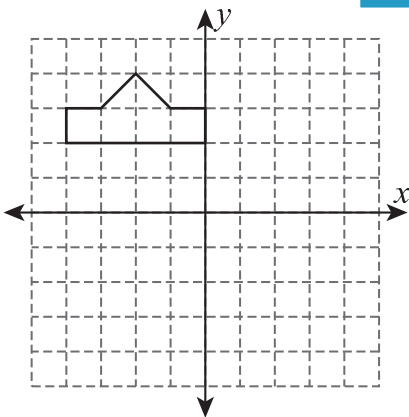
4) 3 units right



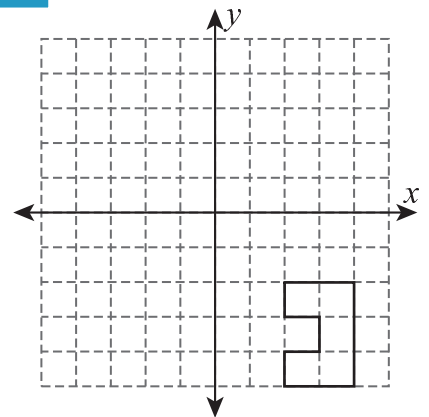
5) 1 unit right and 4 units up



6) 4 units right and 2 units down



7) 2 units up and 6 units left



PREVIEW

Gain complete access to the largest collection of worksheets in all subjects!

Members, please log in to download this worksheet.

Not a member? Please sign up to gain complete access.

www.mathworksheets4kids.com