

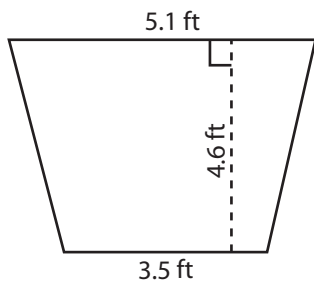
Name : _____

Trapezoid - Area

T1S1

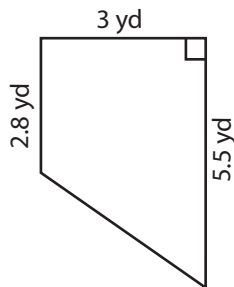
Find the area of each trapezoid. Round your answer to two decimal places.

1)



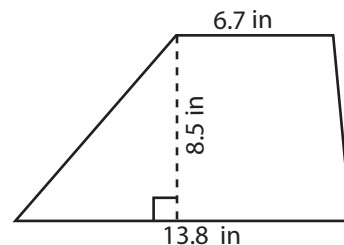
Area = _____

2)



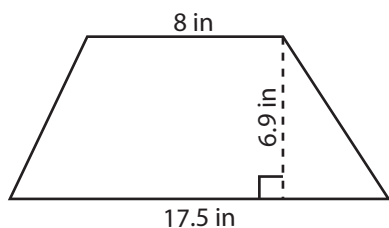
Area = _____

3)



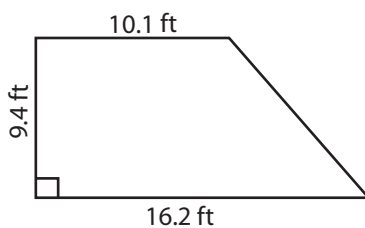
Area = _____

4)



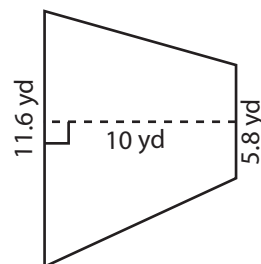
Area = _____

5)



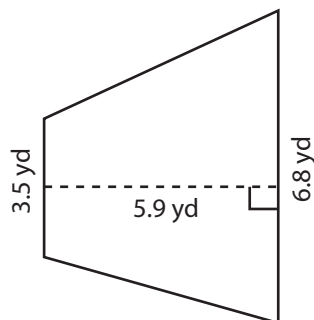
Area = _____

6)



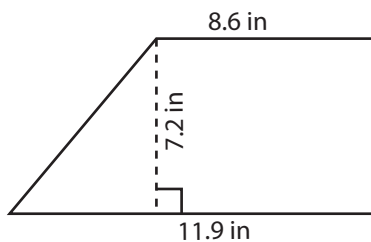
Area = _____

7)



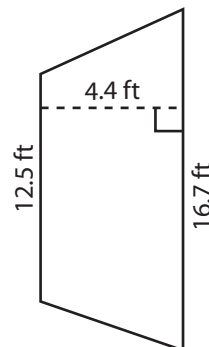
Area = _____

8)



Area = _____

9)



Area = _____

Name : _____

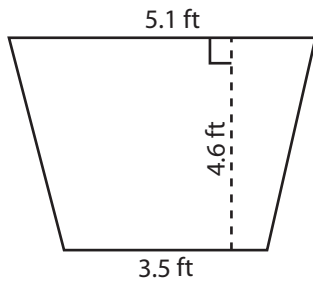
Answer key

Trapezoid - Area

T1S1

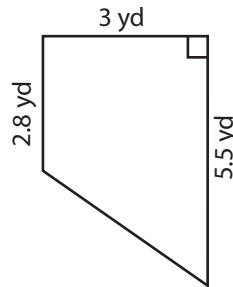
Find the area of each trapezoid. Round your answer to two decimal places.

1)



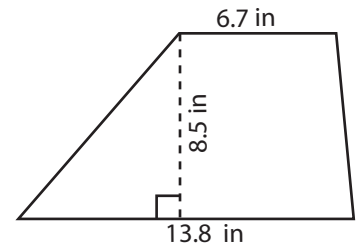
Area = 19.78 ft²

2)



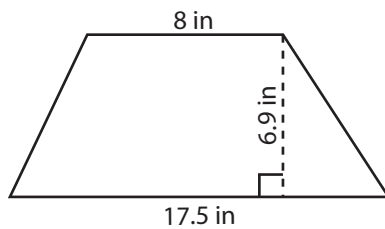
Area = 12.45 yd²

3)



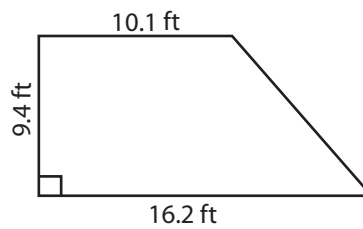
Area = 87.13 in²

4)



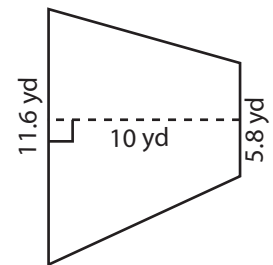
Area = 87.98 in²

5)



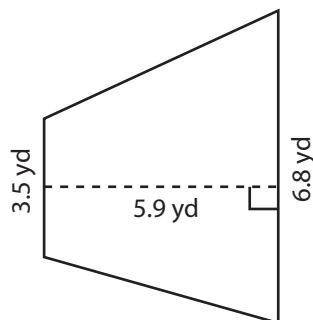
Area = 123.61 ft²

6)



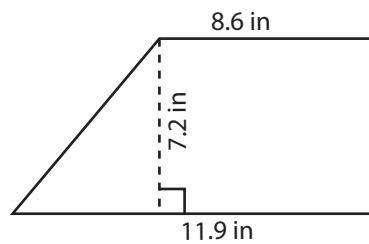
Area = 87 yd²

7)



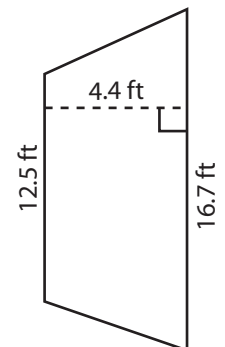
Area = 30.39 yd²

8)



Area = 73.8 in²

9)



Area = 64.24 ft²