

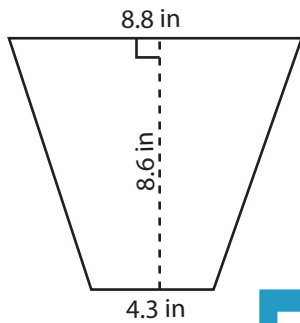
Name : \_\_\_\_\_

## Trapezoid - Area

T1S2

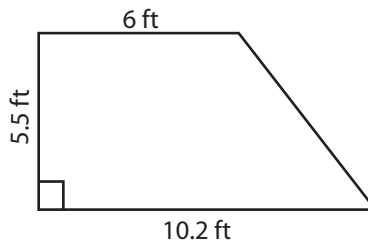
Find the area of each trapezoid. Round your answer to two decimal places.

1)



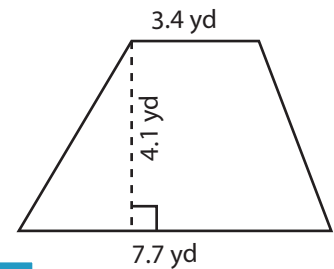
Area = \_\_\_\_\_

2)



10.2 ft

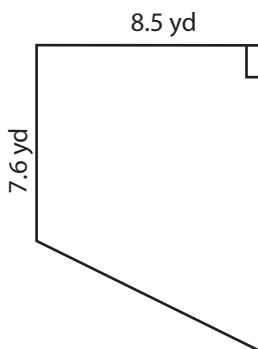
3)



7.7 yd

Area = \_\_\_\_\_

4)



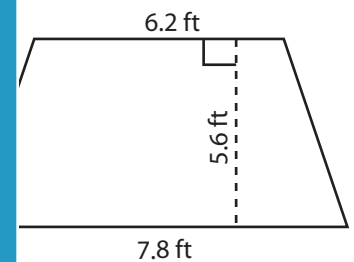
Area = \_\_\_\_\_

Gain complete access to the largest collection of worksheets in all subjects!

Members, please log in to download this worksheet.

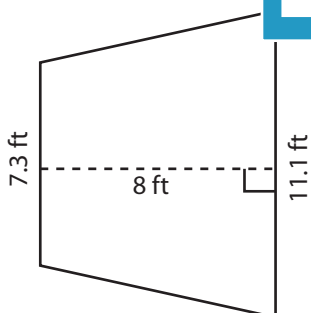
Not a member? Please sign up to gain complete access.

[www.mathworksheets4kids.com](http://www.mathworksheets4kids.com)

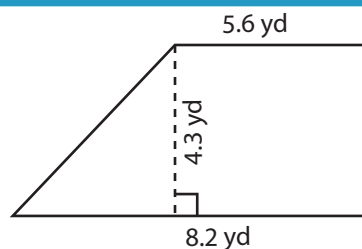


Area = \_\_\_\_\_

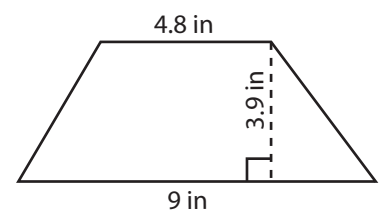
7)



Area = \_\_\_\_\_



Area = \_\_\_\_\_



Area = \_\_\_\_\_

Name : \_\_\_\_\_

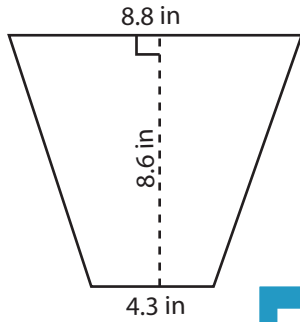
## Answer key

### Trapezoid - Area

T1S2

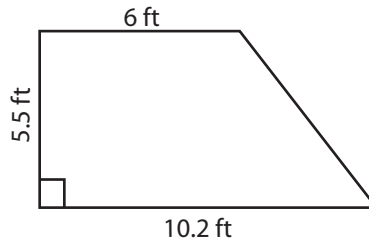
Find the area of each trapezoid. Round your answer to two decimal places.

1)

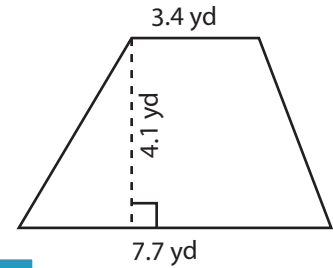


Area = 56.33 in<sup>2</sup>

2)

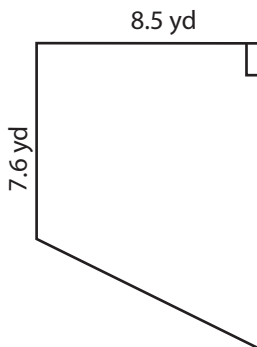


3)



Area = 22.76 yd<sup>2</sup>

4)



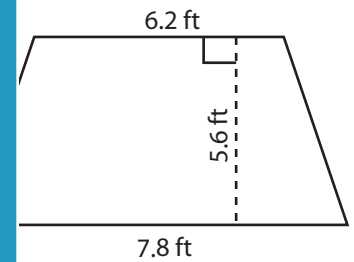
Area = 84.58 yd<sup>2</sup>

Gain complete access to the largest collection of worksheets in all subjects!

Members, please log in to download this worksheet.

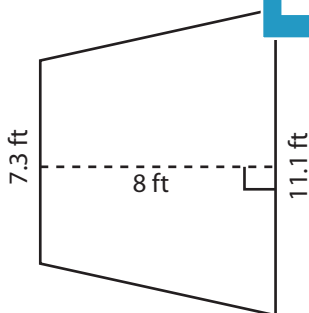
Not a member? Please sign up to gain complete access.

[www.mathworksheets4kids.com](http://www.mathworksheets4kids.com)

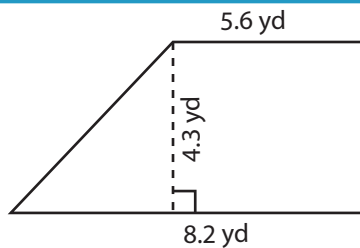


Area = 39.2 ft<sup>2</sup>

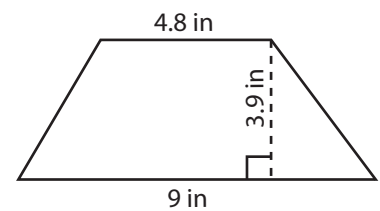
7)



Area = 73.6 ft<sup>2</sup>



Area = 29.67 yd<sup>2</sup>



Area = 26.91 in<sup>2</sup>