

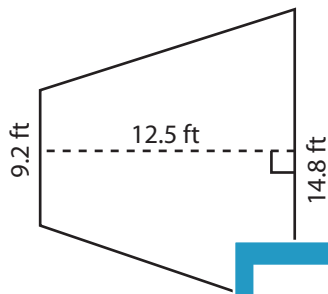
Name : _____

Trapezoid - Area

T1S3

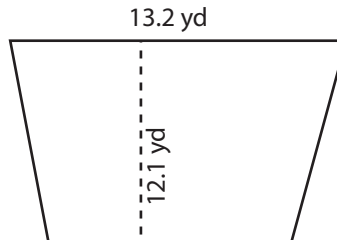
Find the area of each trapezoid. Round your answer to two decimal places.

1)

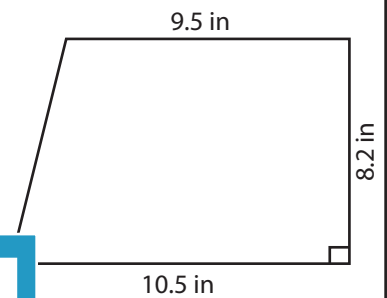


Area = _____

2)



3)



Area = _____

4)



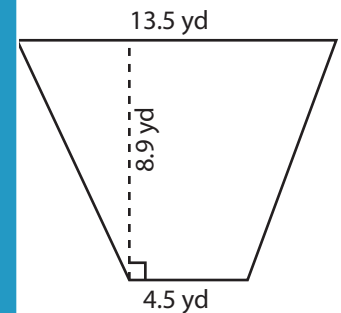
Area = _____

Gain complete access to the largest collection of worksheets in all subjects!

Members, please log in to download this worksheet.

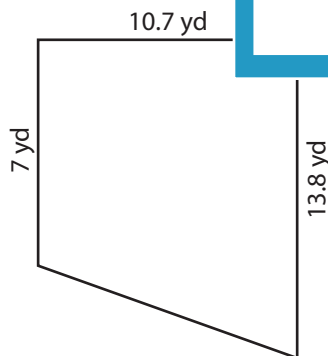
Not a member? Please sign up to gain complete access.

www.mathworksheets4kids.com

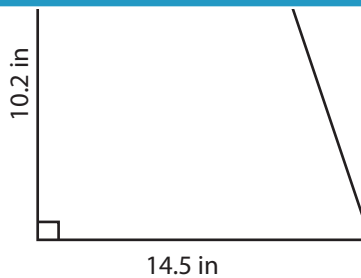


Area = _____

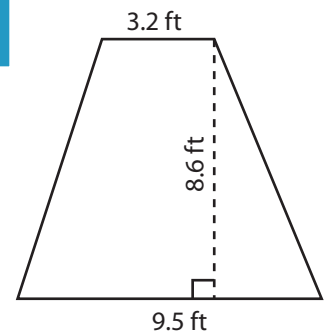
7)



Area = _____



Area = _____



Area = _____

Name : _____

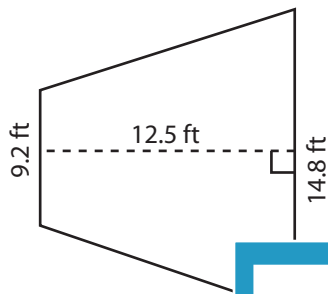
Answer key

Trapezoid - Area

T1S3

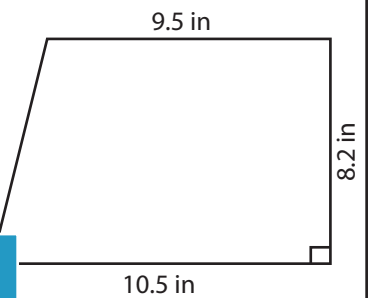
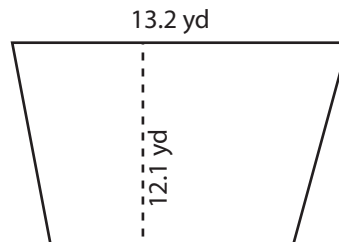
Find the area of each trapezoid. Round your answer to two decimal places.

1)



Area = 150 ft²

2)



Area = 82 in²

4)



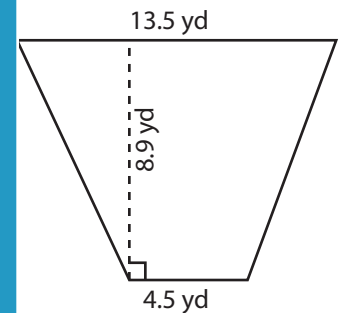
Area = 49.6 in²

Gain complete access to the largest collection of worksheets in all subjects!

Members, please log in to download this worksheet.

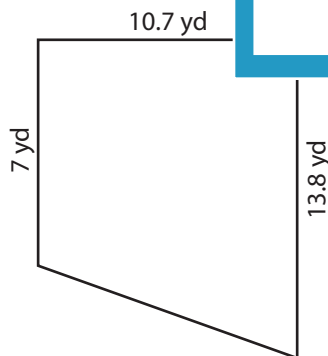
Not a member? Please sign up to gain complete access.

www.mathworksheets4kids.com

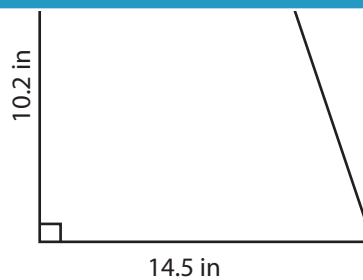


Area = 80.1 yd²

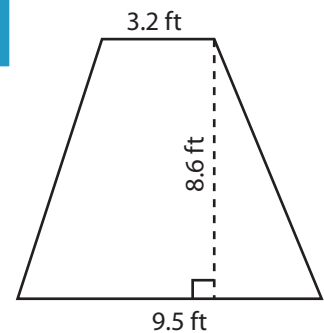
7)



Area = 111.28 yd²



Area = 122.91 in²



Area = 54.61 ft²