

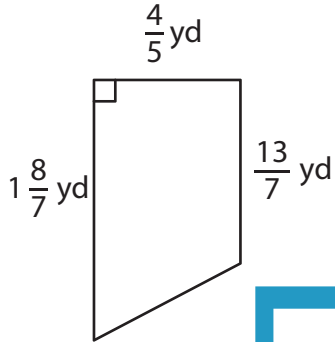
Name : _____

Area – Trapezoid

T1S3

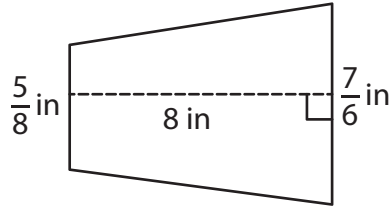
Find the area of each trapezoid.

1)

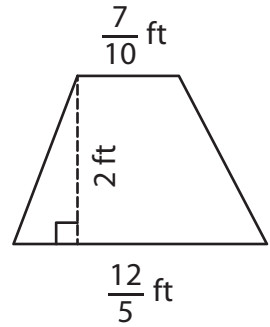


Area =

2)

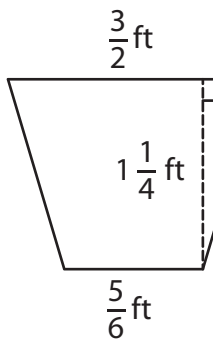


3)



Area =

4)



Area =

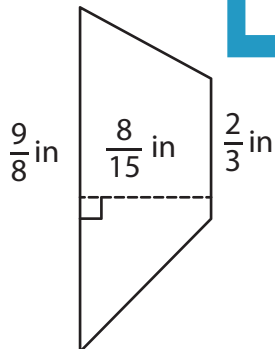
Gain complete access to the largest collection of worksheets in all subjects!

Members, please log in to download this worksheet.

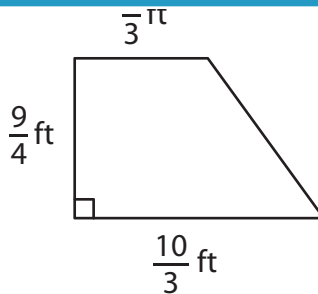
Not a member? Please sign up to gain complete access.

www.mathworksheets4kids.com

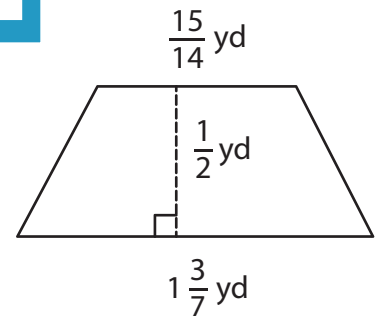
7)



Area =



Area =



Area =

Name : _____

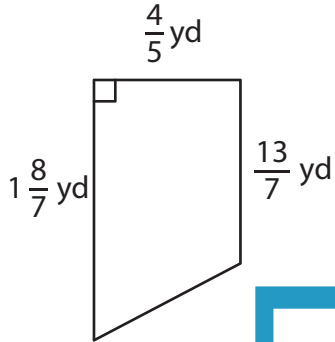
Answer key

Area – Trapezoid

T1S3

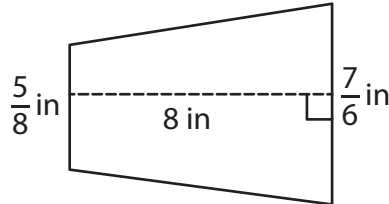
Find the area of each trapezoid.

1)

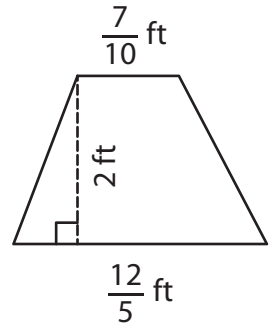


Area = $\frac{8}{5}$ or $1\frac{3}{5}$

2)

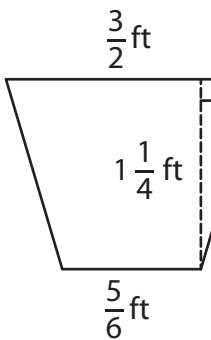


3)



Area = $\frac{31}{10}$ or $3\frac{1}{10}$ ft²

4)



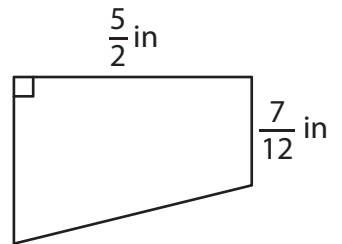
Area = $\frac{35}{24}$ or $1\frac{7}{24}$

PREVIEW
Gain complete access to the largest collection of worksheets in all subjects!

Members, please log in to download this worksheet.

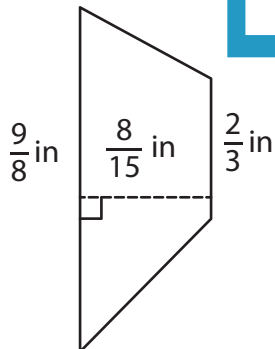
Not a member? Please sign up to gain complete access.

www.mathworksheets4kids.com

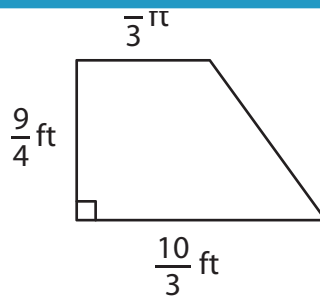


Area = $\frac{85}{48}$ or $1\frac{37}{48}$ in²

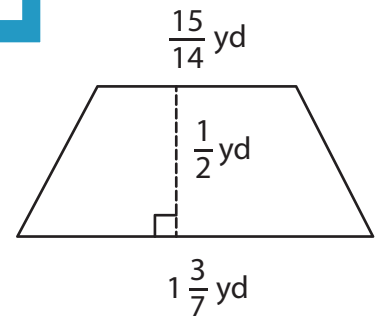
7)



Area = $\frac{43}{90}$ in²



Area = $\frac{51}{8}$ or $6\frac{3}{8}$ ft²



Area = $\frac{5}{8}$ yd²