

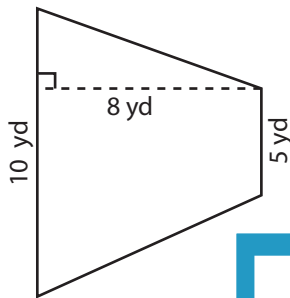
Name : \_\_\_\_\_

## Trapezoid - Area

T1L1S3

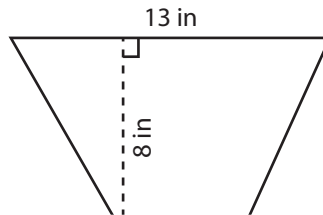
Find the area of each trapezoid.

1)

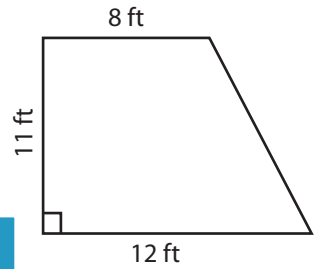


Area = \_\_\_\_\_

2)

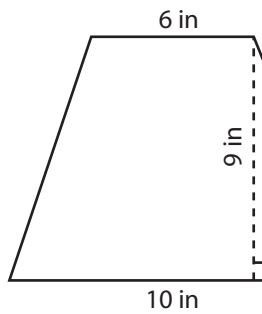


3)



Area = \_\_\_\_\_

4)



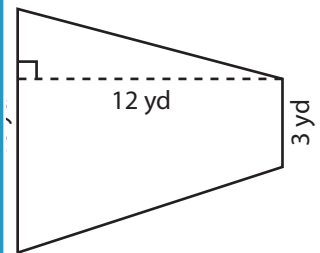
Area = \_\_\_\_\_

Gain complete access to the largest collection of worksheets in all subjects!

Members, please log in to download this worksheet.

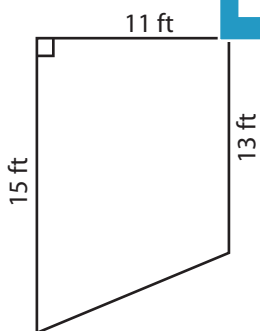
Not a member? Please sign up to gain complete access.

[www.mathworksheets4kids.com](http://www.mathworksheets4kids.com)

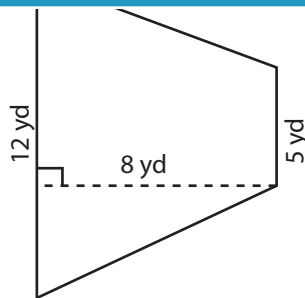


Area = \_\_\_\_\_

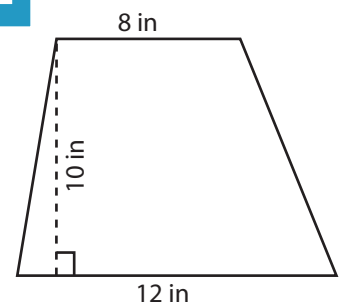
7)



Area = \_\_\_\_\_



Area = \_\_\_\_\_



Area = \_\_\_\_\_

Name : \_\_\_\_\_

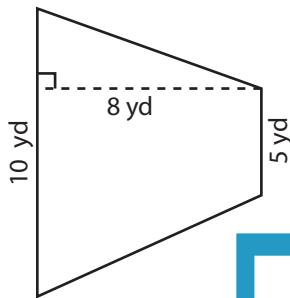
## Answer key

### Trapezoid - Area

T1L1S3

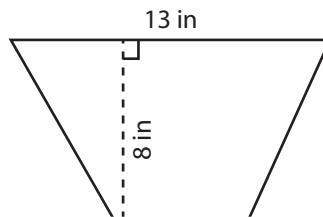
Find the area of each trapezoid.

1)

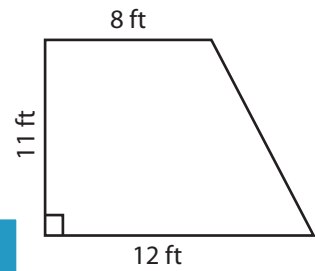


Area = 60 yd<sup>2</sup>

2)

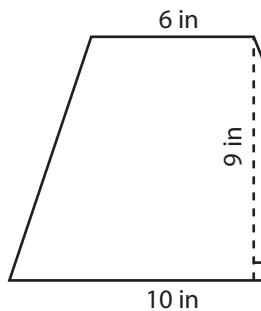


3)



Area = 110 ft<sup>2</sup>

4)



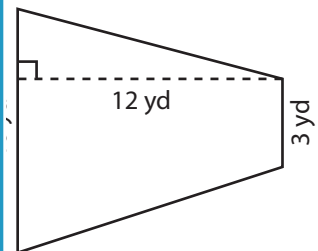
Area = 72 in<sup>2</sup>

Gain complete access to the largest collection of worksheets in all subjects!

Members, please log in to download this worksheet.

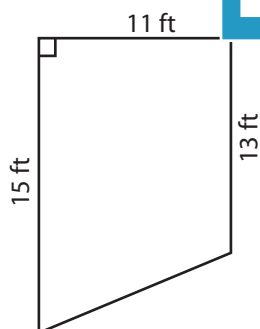
Not a member? Please sign up to gain complete access.

[www.mathworksheets4kids.com](http://www.mathworksheets4kids.com)

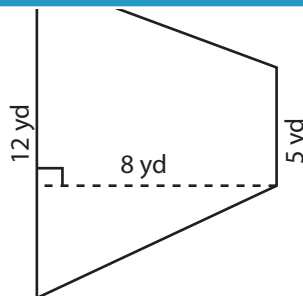


Area = 78 yd<sup>2</sup>

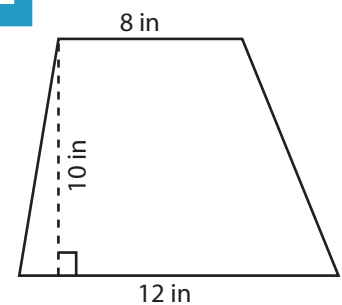
7)



Area = 154 ft<sup>2</sup>



Area = 68 yd<sup>2</sup>



Area = 100 in<sup>2</sup>