

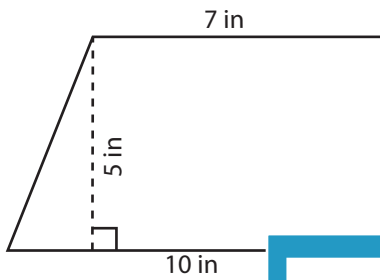
Name : \_\_\_\_\_

## Trapezoid - Area

T1L2S1

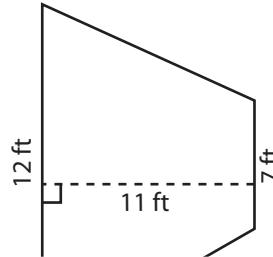
Find the area of each trapezoid.

1)

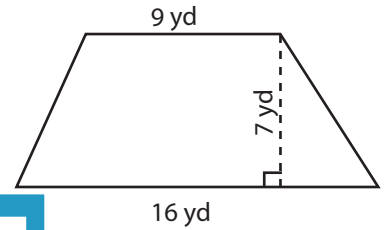


Area = \_\_\_\_\_

2)

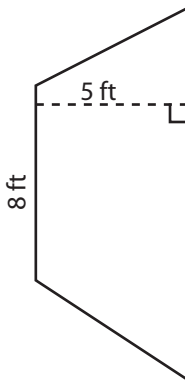


3)



Area = \_\_\_\_\_

4)



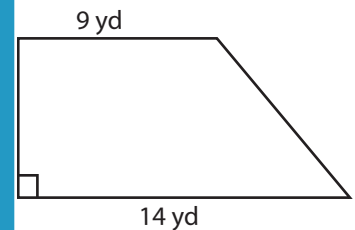
Area = \_\_\_\_\_

Gain complete access to the largest collection of worksheets in all subjects!

Members, please log in to download this worksheet.

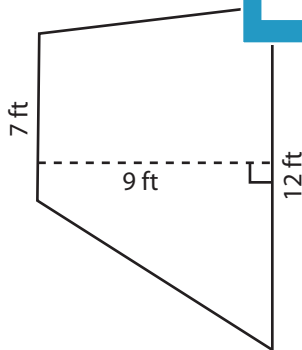
Not a member? Please sign up to gain complete access.

[www.mathworksheets4kids.com](http://www.mathworksheets4kids.com)

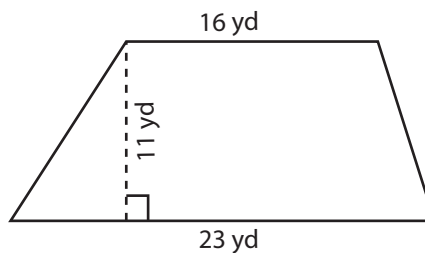


Area = \_\_\_\_\_

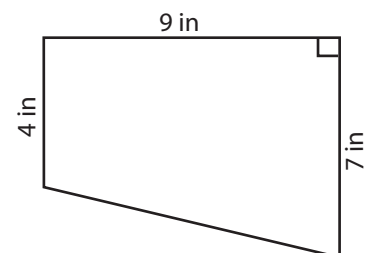
7)



Area = \_\_\_\_\_



Area = \_\_\_\_\_



Area = \_\_\_\_\_

Name : \_\_\_\_\_

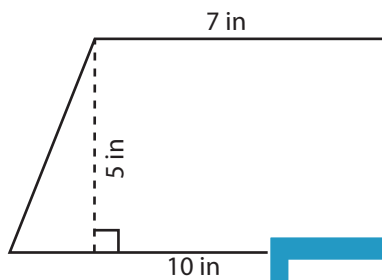
## Answer key

T1L2S1

### Trapezoid - Area

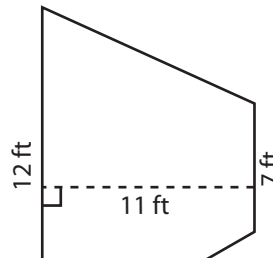
Find the area of each trapezoid.

1)

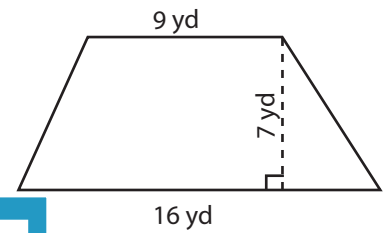


Area = 42.5 in<sup>2</sup>

2)

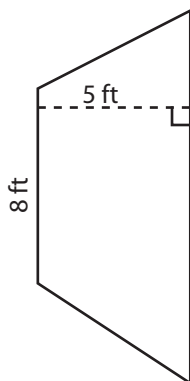


3)



Area = 87.5 yd<sup>2</sup>

4)



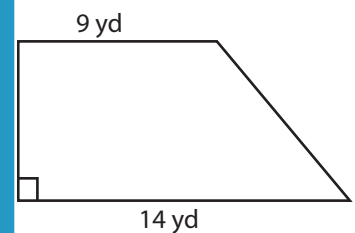
Area = 52.5 ft<sup>2</sup>

Gain complete access to the largest collection of worksheets in all subjects!

Members, please log in to download this worksheet.

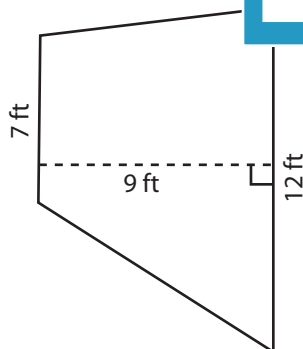
Not a member? Please sign up to gain complete access.

[www.mathworksheets4kids.com](http://www.mathworksheets4kids.com)

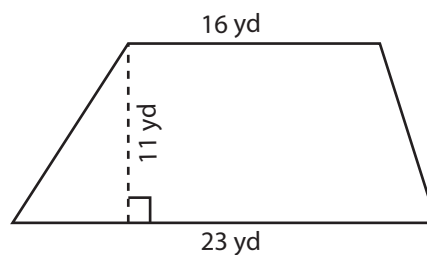


Area = 92 yd<sup>2</sup>

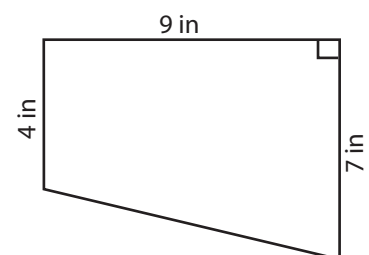
7)



Area = 85.5 ft<sup>2</sup>



Area = 214.5 yd<sup>2</sup>



Area = 49.5 in<sup>2</sup>