

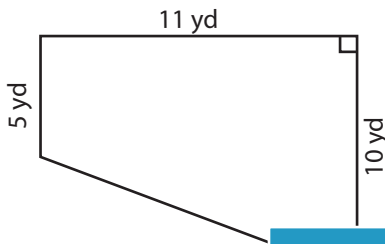
Name : \_\_\_\_\_

## Trapezoid - Area

T1L2S2

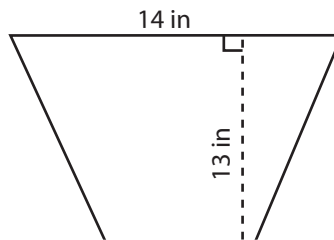
Find the area of each trapezoid.

1)

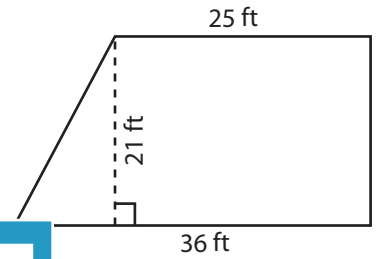


Area = \_\_\_\_\_

2)

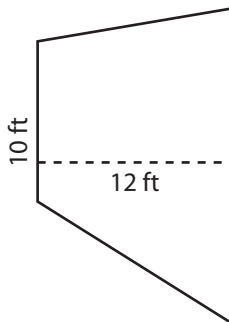


3)



Area = \_\_\_\_\_

4)



Area = \_\_\_\_\_

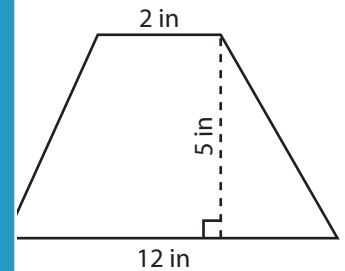
**PREVIEW**

Gain complete access to the largest collection of worksheets in all subjects!

Members, please log in to download this worksheet.

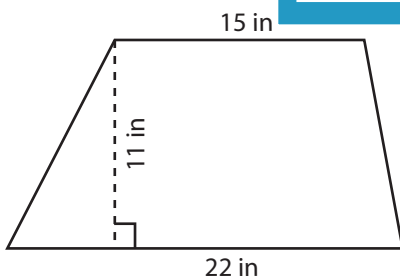
Not a member? Please sign up to gain complete access.

[www.mathworksheets4kids.com](http://www.mathworksheets4kids.com)

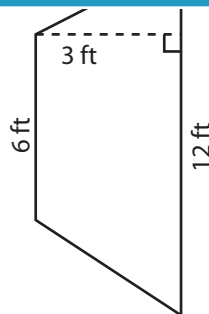


Area = \_\_\_\_\_

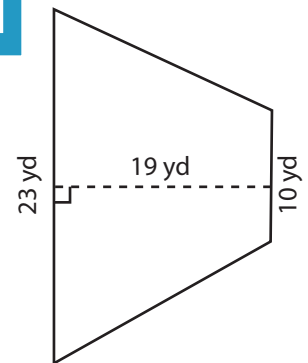
7)



Area = \_\_\_\_\_



Area = \_\_\_\_\_



Area = \_\_\_\_\_

Name : \_\_\_\_\_

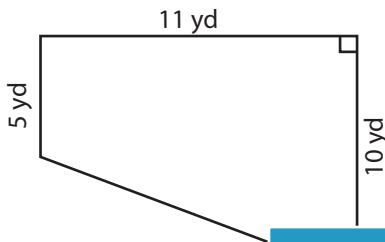
## Answer key

### Trapezoid - Area

T1L2S2

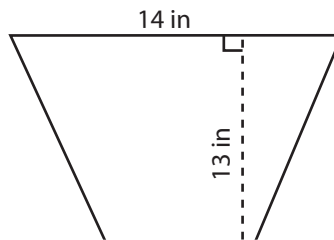
Find the area of each trapezoid.

1)

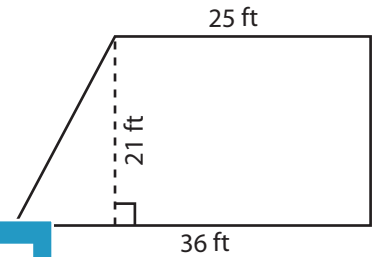


Area = 82.5 yd<sup>2</sup>

2)

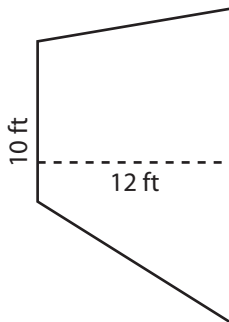


3)



Area = 640.5 ft<sup>2</sup>

4)



Area = 162 ft<sup>2</sup>

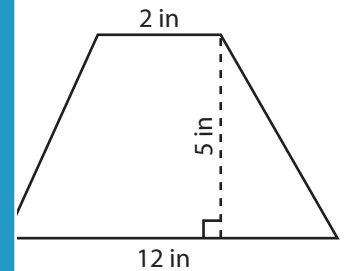
**PREVIEW**

Gain complete access to the largest collection of worksheets in all subjects!

Members, please log in to download this worksheet.

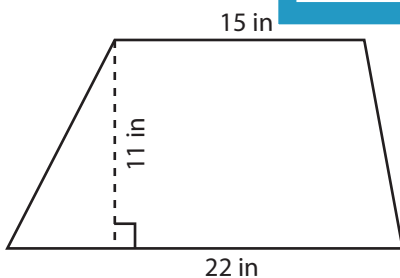
Not a member? Please sign up to gain complete access.

[www.mathworksheets4kids.com](http://www.mathworksheets4kids.com)

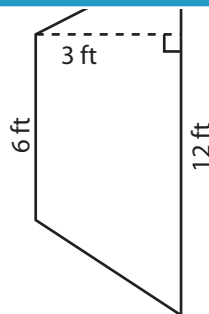


Area = 35 in<sup>2</sup>

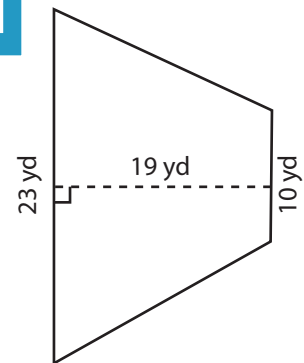
7)



Area = 203.5 in<sup>2</sup>



Area = 27 ft<sup>2</sup>



Area = 313.5 yd<sup>2</sup>