

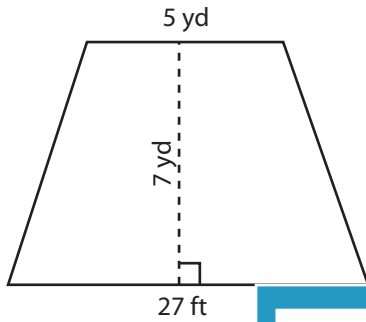
Name : _____

Trapezoid - Area

T1S1

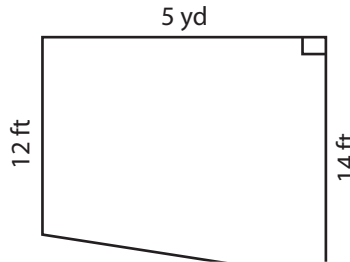
Find the area of each trapezoid.

1)



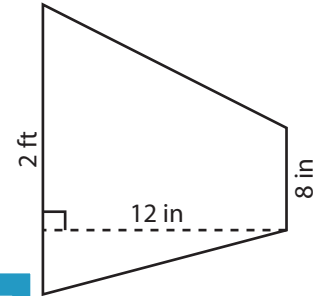
Area = _____

2)

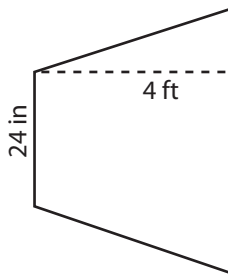


Area = _____ in²

3)



4)



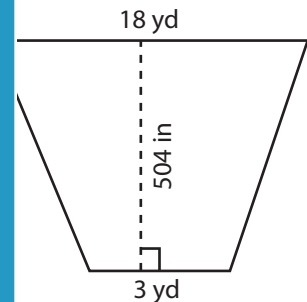
Area = _____

Gain complete access to the largest collection of worksheets in all subjects!

Members, please log in to download this worksheet.

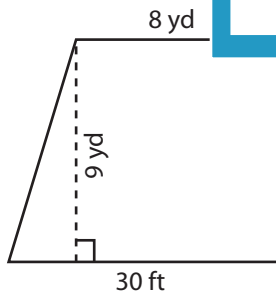
Not a member? Please sign up to gain complete access.

www.mathworksheets4kids.com

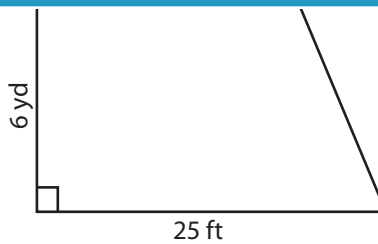


Area = _____ yd²

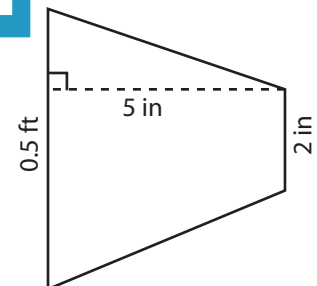
7)



Area = _____ yd²



Area = _____ ft²



Area = _____ in²

Name : _____

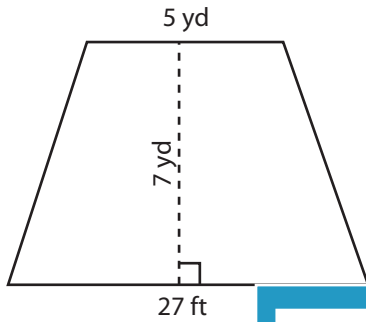
Answer key

Trapezoid - Area

T1S1

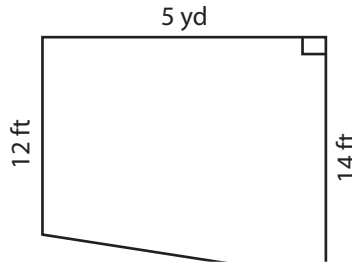
Find the area of each trapezoid.

1)

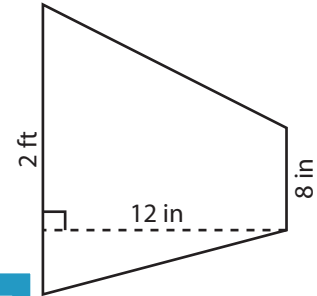


Area = 49

2)

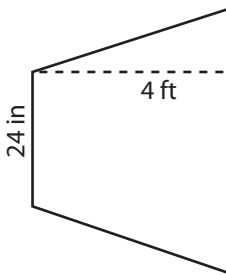


3)



Area = 192 in²

4)



Area = 2,016

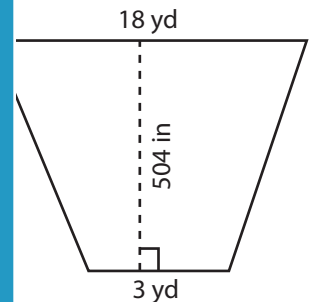
PREVIEW

Gain complete access to the largest collection of worksheets in all subjects!

Members, please log in to download this worksheet.

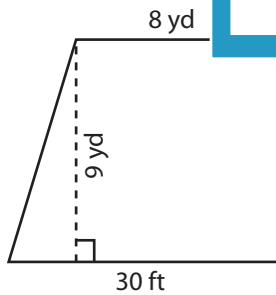
Not a member? Please sign up to gain complete access.

www.mathworksheets4kids.com

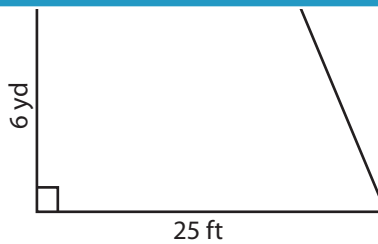


Area = 147 yd²

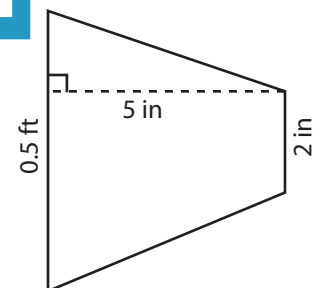
7)



Area = 81 yd²



Area = 405 ft²



Area = 20 in²