

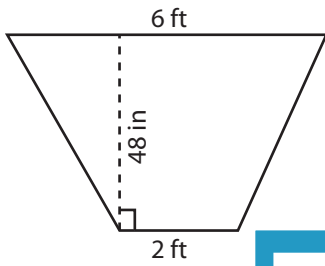
Name : _____

Trapezoid - Area

T1S2

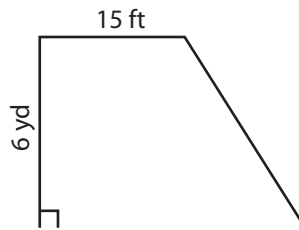
Find the area of each trapezoid.

1)

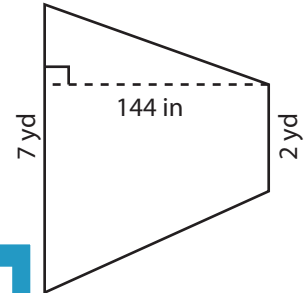


Area = _____

2)

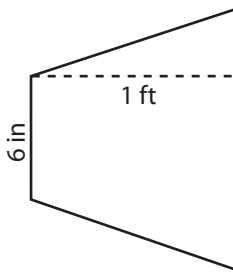


3)



Area = _____ yd²

4)



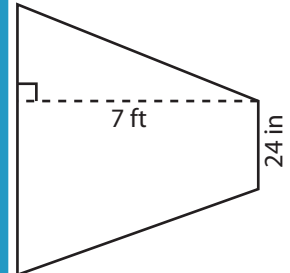
Area = _____

Gain complete access to the largest collection of worksheets in all subjects!

Members, please log in to download this worksheet.

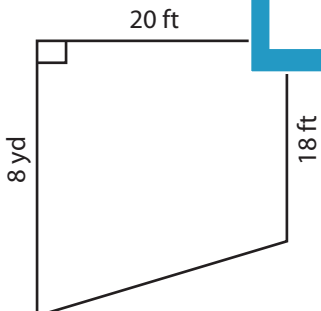
Not a member? Please sign up to gain complete access.

www.mathworksheets4kids.com

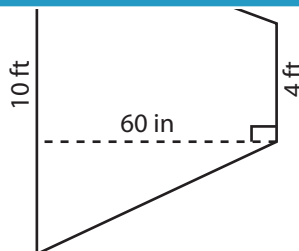


Area = _____ ft²

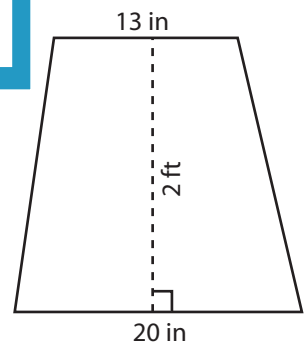
7)



Area = _____ ft²



Area = _____ ft²



Area = _____ in²

Name : _____

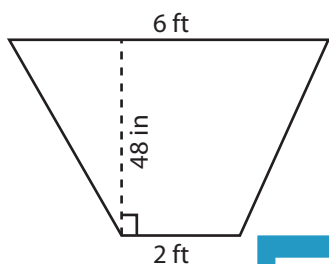
Answer key

Trapezoid - Area

T1S2

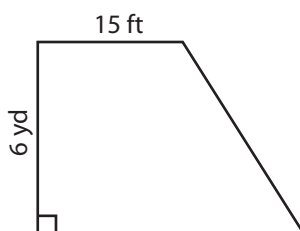
Find the area of each trapezoid.

1)

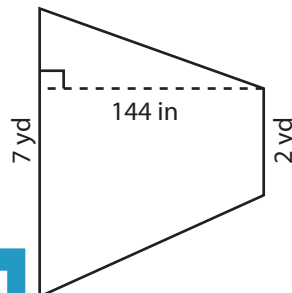


Area = 16

2)

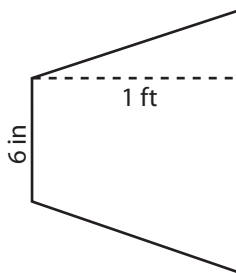


3)



Area = 18 yd²

4)



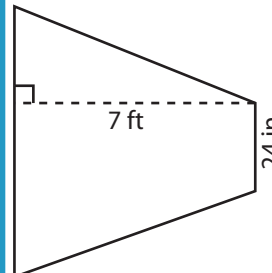
Area = 144

Gain complete access to the largest collection of worksheets in all subjects!

Members, please log in to download this worksheet.

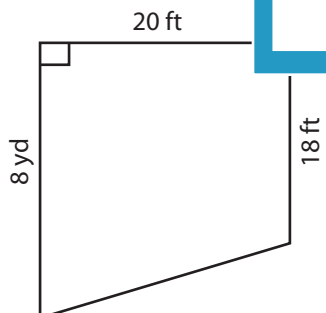
Not a member? Please sign up to gain complete access.

www.mathworksheets4kids.com

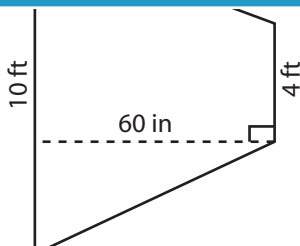


Area = 35 ft²

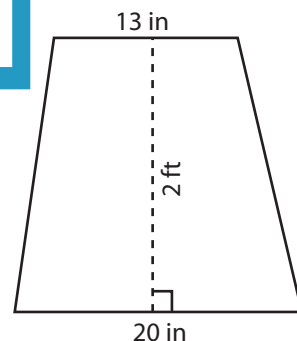
7)



Area = 420 ft²



Area = 35 ft²



Area = 396 in²