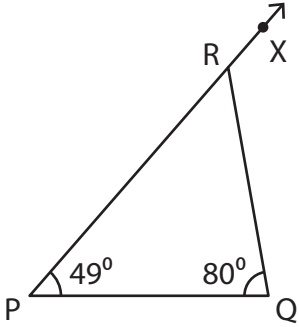


Triangle - Exterior Angles

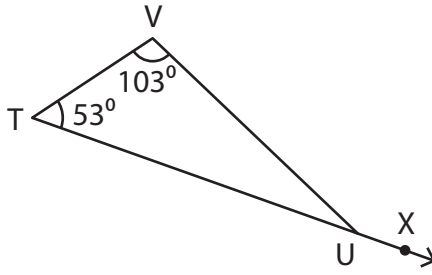
Find the measure of the indicated angle in each triangle.

1)



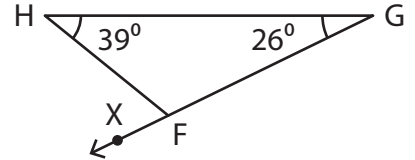
$m\angle QRX =$ _____

2)



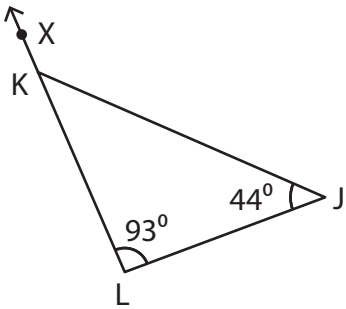
$m\angle VUX =$ _____

3)



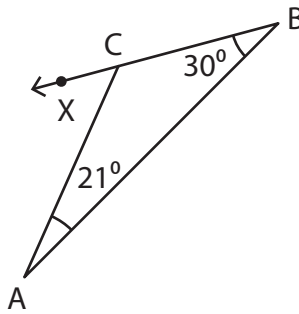
$m\angle HFX =$ _____

4)



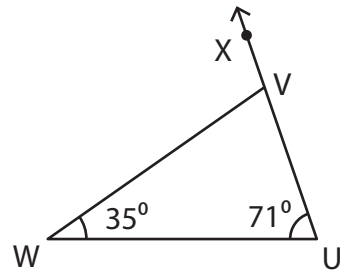
$m\angle JKX =$ _____

5)



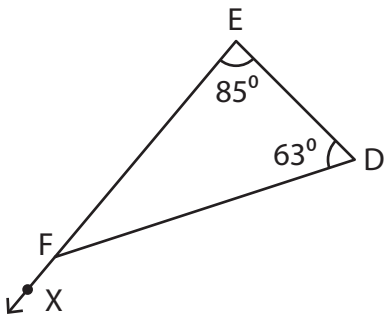
$m\angle ACX =$ _____

6)



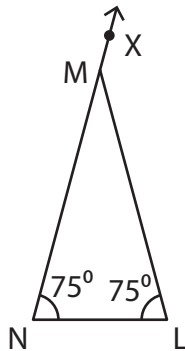
$m\angle WVX =$ _____

7)



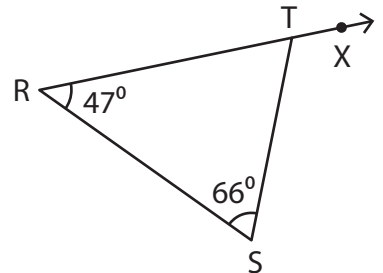
$m\angle DFX =$ _____

8)



$m\angle LMN =$ _____

9)

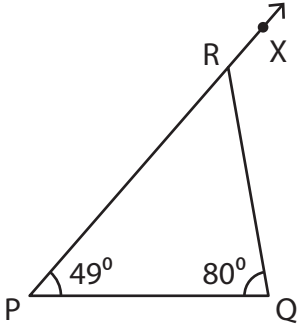


$m\angle STX =$ _____

Triangle - Exterior Angles

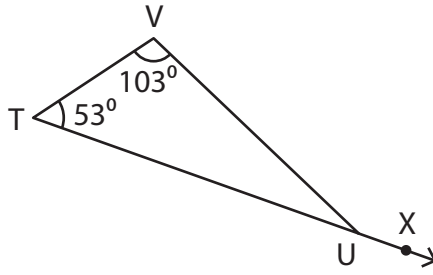
Find the measure of the indicated angle in each triangle.

1)



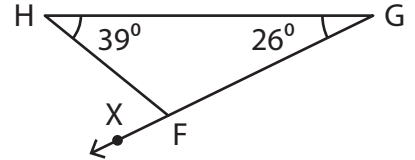
$m\angle QRX = \underline{129^\circ}$

2)



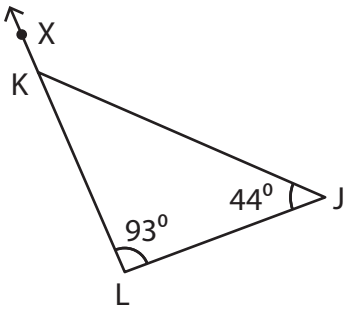
$m\angle VUX = \underline{156^\circ}$

3)



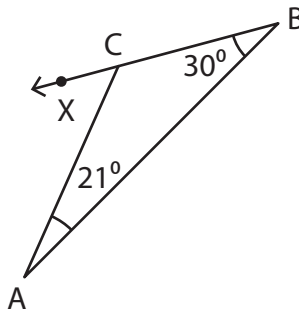
$m\angle HFX = \underline{65^\circ}$

4)



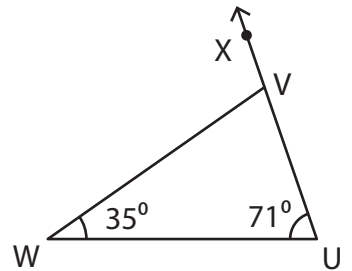
$m\angle JKX = \underline{137^\circ}$

5)



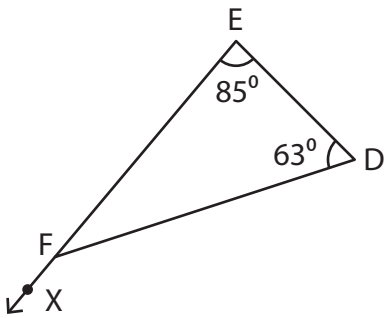
$m\angle ACX = \underline{51^\circ}$

6)



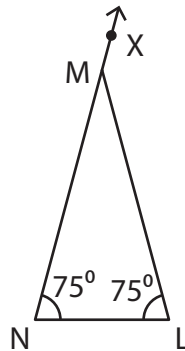
$m\angle WVX = \underline{106^\circ}$

7)



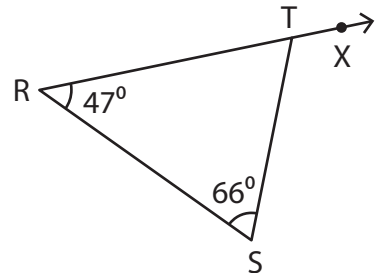
$m\angle DFX = \underline{148^\circ}$

8)



$m\angle LMN = \underline{150^\circ}$

9)



$m\angle STX = \underline{113^\circ}$