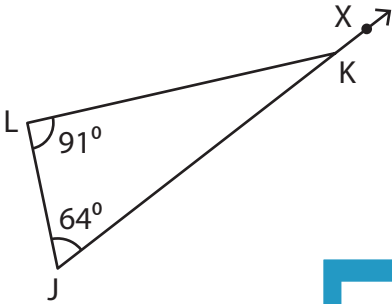


Triangle - Exterior Angles

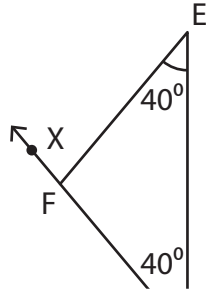
Find the measure of the indicated angle in each triangle.

1)

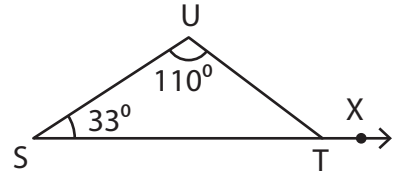


$m\angle LKX =$ _____

2)

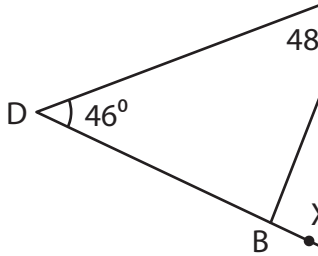


3)



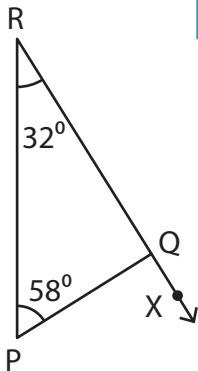
$m\angle UTX =$ _____

4)

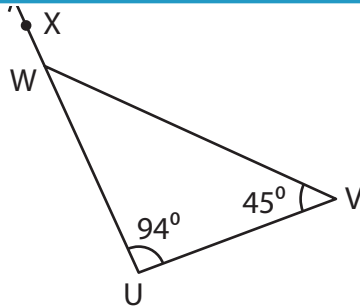


$m\angle CBX =$ _____

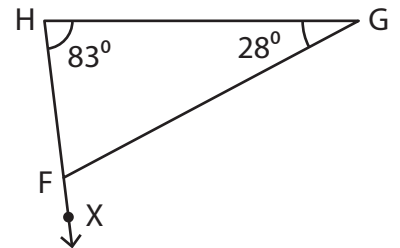
7)



$m\angle PQX =$ _____



$m\angle VWX =$ _____



$m\angle GFX =$ _____

PREVIEW

Gain complete access to the largest collection of worksheets in all subjects!

Members, please log in to download this worksheet.

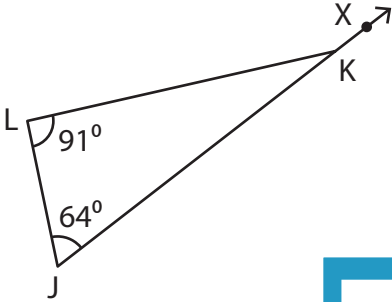
Not a member? Please sign up to gain complete access.

www.mathworksheets4kids.com

Triangle - Exterior Angles

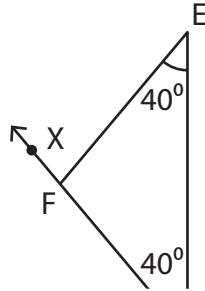
Find the measure of the indicated angle in each triangle.

1)

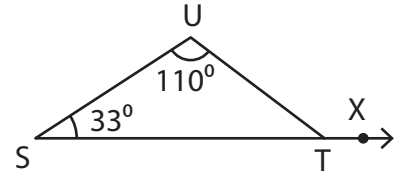


$m\angle LKX = \underline{155^\circ}$

2)

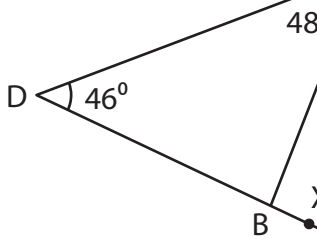


3)



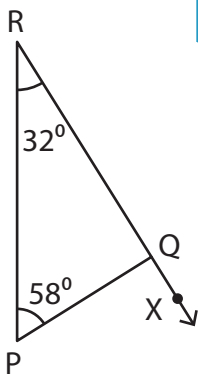
$m\angle UTX = \underline{143^\circ}$

4)

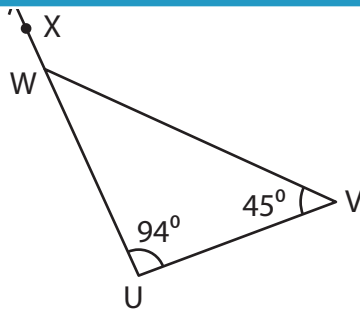


$m\angle CBX = \underline{94^\circ}$

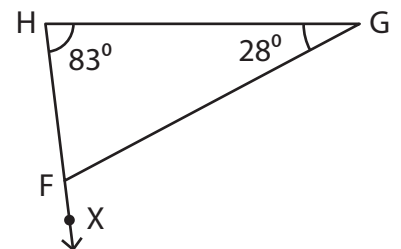
7)



$m\angle PQX = \underline{90^\circ}$



$m\angle VWX = \underline{139^\circ}$



$m\angle GFX = \underline{111^\circ}$

PREVIEW

Gain complete access to the largest collection of worksheets in all subjects!

Members, please log in to download this worksheet.

Not a member? Please sign up to gain complete access.

www.mathworksheets4kids.com