

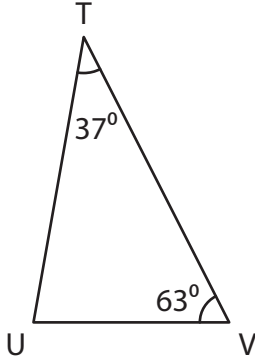
Name : _____

Triangle - Interior Angles

Sheet 1

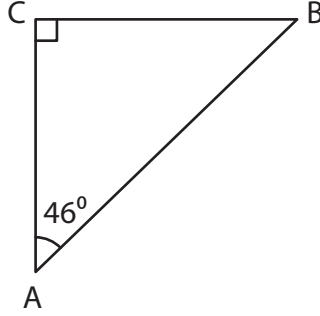
Find the measure of the indicated angle in each triangle.

1)



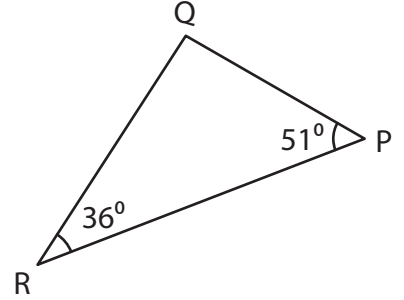
$m\angle U =$ _____

2)



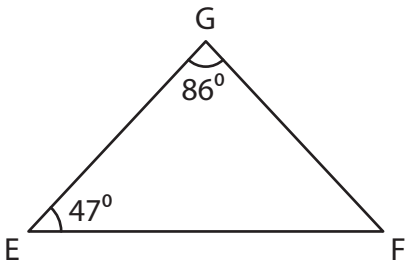
$m\angle B =$ _____

3)



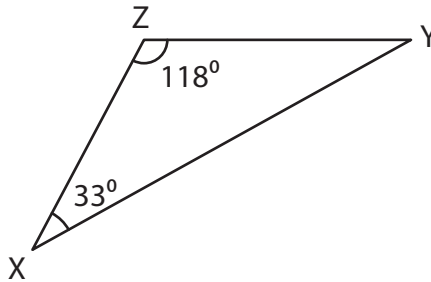
$m\angle Q =$ _____

4)



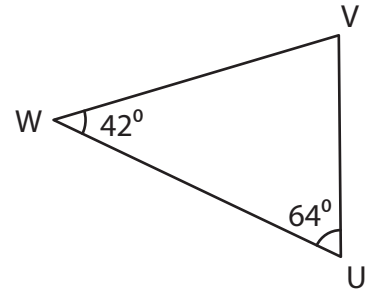
$m\angle F =$ _____

5)



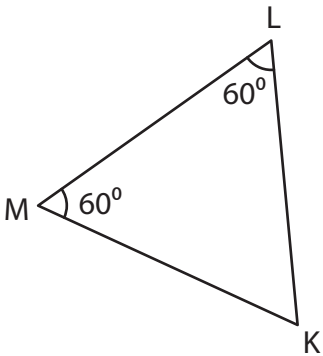
$m\angle Y =$ _____

6)



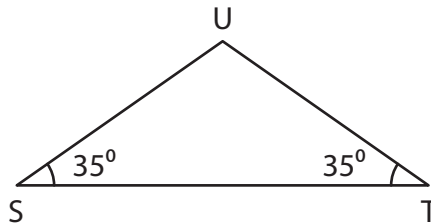
$m\angle V =$ _____

7)



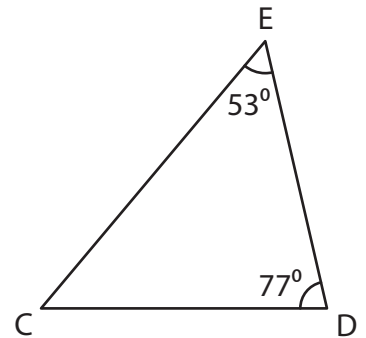
$m\angle K =$ _____

8)



$m\angle U =$ _____

9)

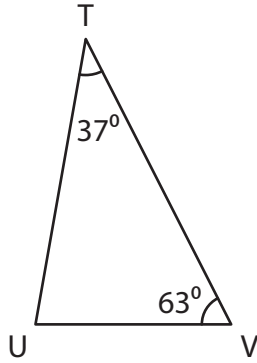


$m\angle C =$ _____

Triangle - Interior Angles

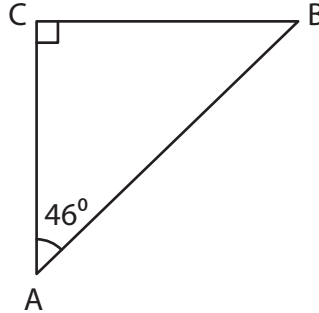
Find the measure of the indicated angle in each triangle.

1)



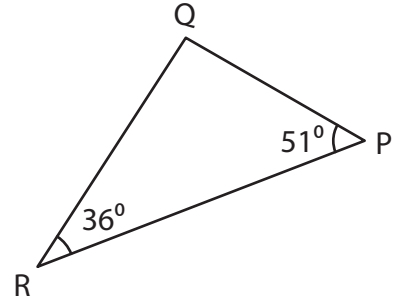
$$m\angle U = \underline{80^\circ}$$

2)



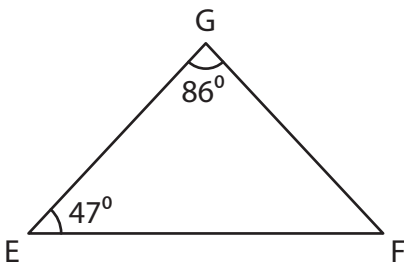
$$m\angle B = \underline{44^\circ}$$

3)



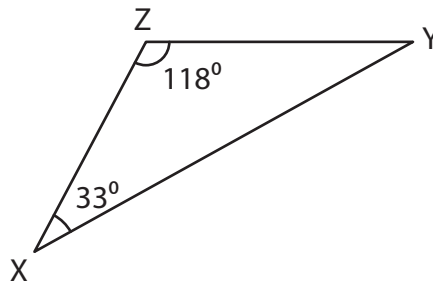
$$m\angle Q = \underline{93^\circ}$$

4)



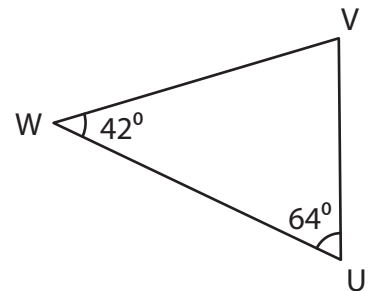
$$m\angle F = \underline{47^\circ}$$

5)



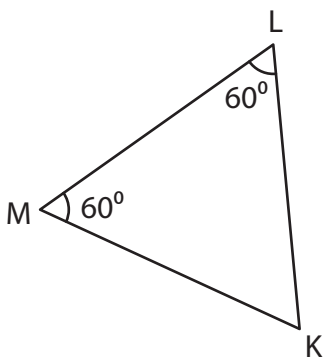
$$m\angle Y = \underline{29^\circ}$$

6)



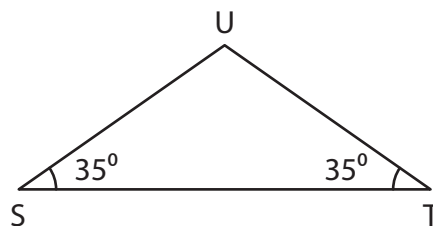
$$m\angle V = \underline{74^\circ}$$

7)



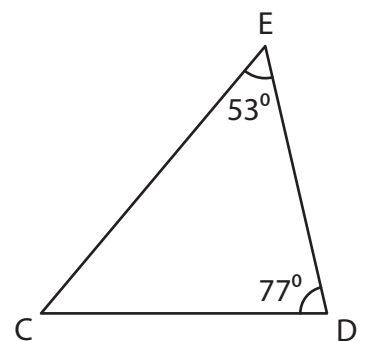
$$m\angle K = \underline{60^\circ}$$

8)



$$m\angle U = \underline{110^\circ}$$

9)



$$m\angle C = \underline{50^\circ}$$