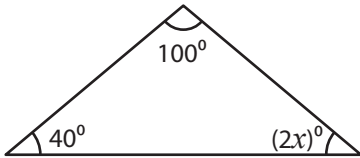


# Triangle - Interior Angles

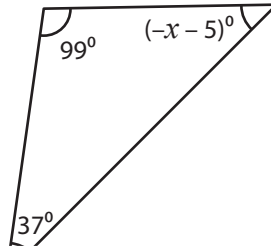
Find the value of  $x$  in each triangle.

1)



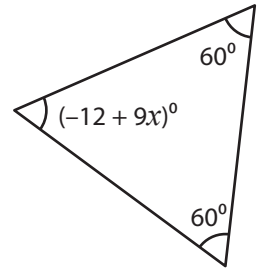
$x =$  \_\_\_\_\_

2)

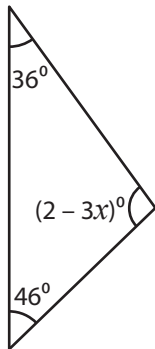


$x =$  \_\_\_\_\_

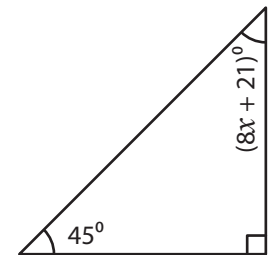
3)



4)

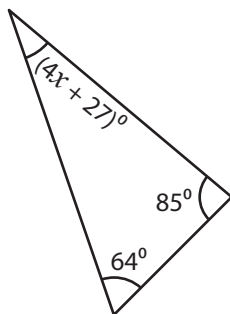


$x =$  \_\_\_\_\_

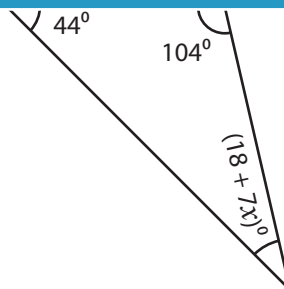


$x =$  \_\_\_\_\_

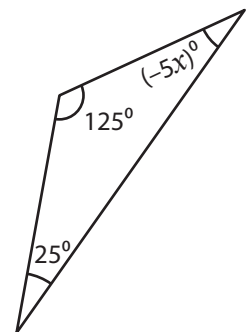
7)



$x =$  \_\_\_\_\_



$x =$  \_\_\_\_\_



$x =$  \_\_\_\_\_

## PREVIEW

Gain complete access to the largest collection of worksheets in all subjects!

Members, please log in to download this worksheet.

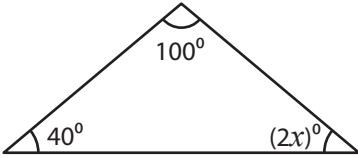
Not a member? Please sign up to gain complete access.

[www.mathworksheets4kids.com](http://www.mathworksheets4kids.com)

**Triangle - Interior Angles**

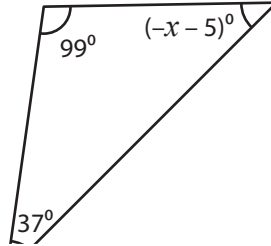
Find the value of  $x$  in each triangle.

1)



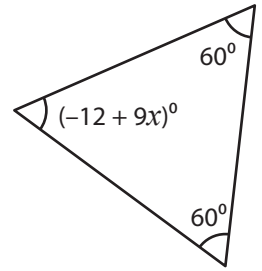
$x = \underline{\quad 20 \quad}$

2)

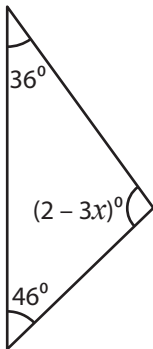


$x = \underline{\quad 8 \quad}$

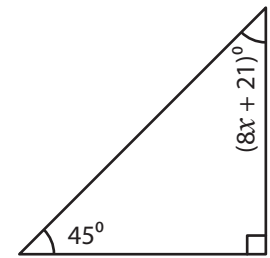
3)



4)



$x = \underline{\quad -32 \quad}$



$x = \underline{\quad 3 \quad}$

**PREVIEW**

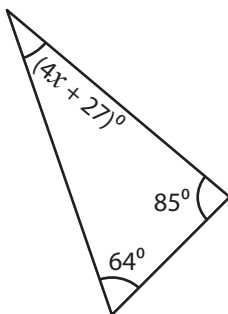
Gain complete access to the largest collection of worksheets in all subjects!

Members, please log in to download this worksheet.

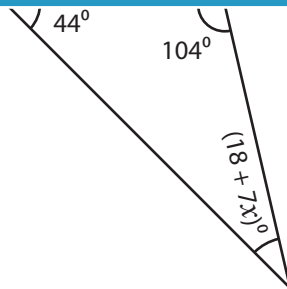
Not a member? Please sign up to gain complete access.

[www.mathworksheets4kids.com](http://www.mathworksheets4kids.com)

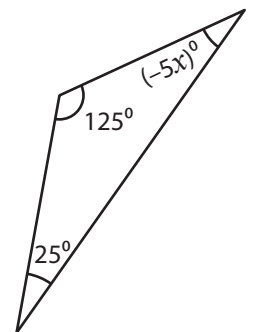
7)



$x = \underline{\quad 1 \quad}$



$x = \underline{\quad 2 \quad}$



$x = \underline{\quad -6 \quad}$