

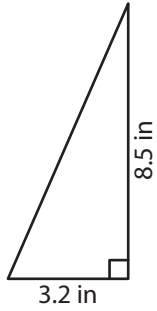
Name : _____

T1S1

Area of a Triangle

Find the area of each triangle.

1)



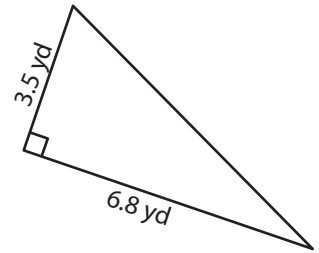
Area =

2)



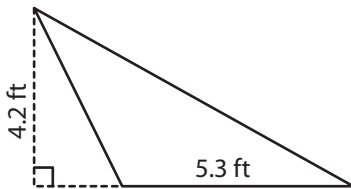
Area =

3)



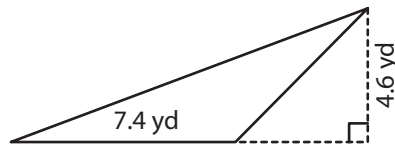
Area =

4)



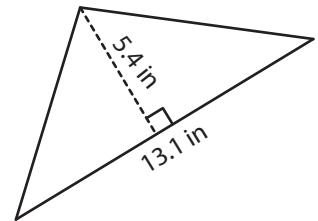
Area =

5)



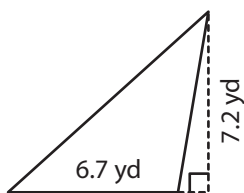
Area =

6)



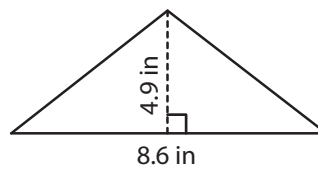
Area =

7)



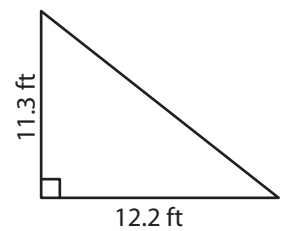
Area =

8)



Area =

9)



Area =

Name : _____

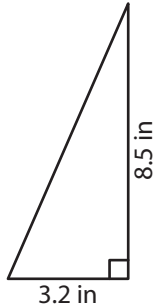
Answer key

T1S1

Area of a Triangle

Find the area of each triangle.

1)



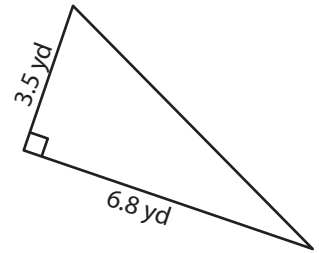
Area = **13.6 in²**

2)



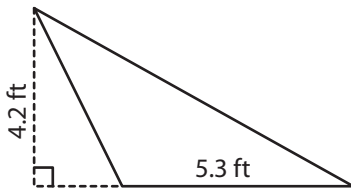
Area = **6.16 ft²**

3)



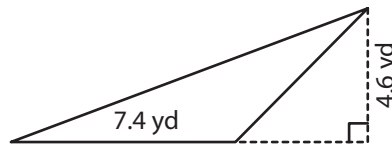
Area = **11.9 yd²**

4)



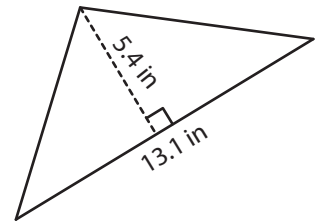
Area = **11.13 ft²**

5)



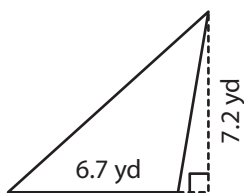
Area = **17.02 yd²**

6)



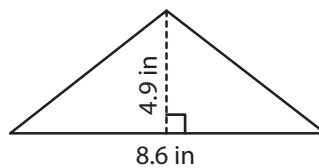
Area = **35.37 in²**

7)



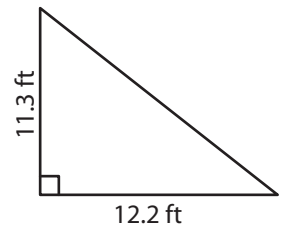
Area = **24.12 yd²**

8)



Area = **21.07 in²**

9)



Area = **68.93 ft²**