

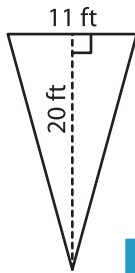
Name : _____

Area of a Triangle

T1L1S4

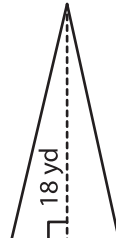
Find the area of each triangle.

1)



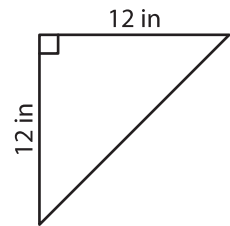
Area =

2)

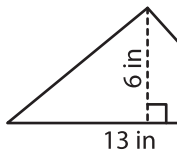


Area =

3)



4)



Area =

PREVIEW
Gain complete access to the largest collection of worksheets in all subjects!

Members, please log in to download this worksheet.

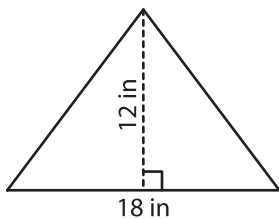
Not a member? Please sign up to gain complete access.

www.mathworksheets4kids.com

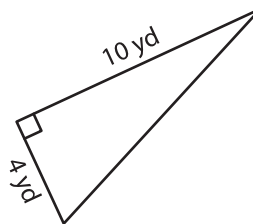


Area =

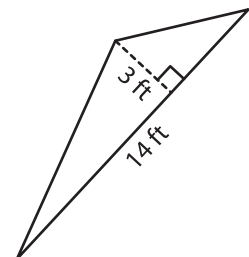
7)



Area =



Area =



Area =