

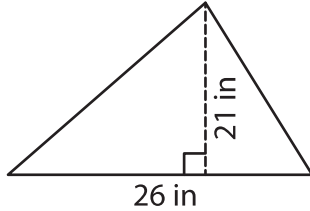
Name : \_\_\_\_\_

T2L2S1

## Area of a Triangle

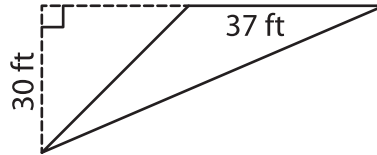
A) Find the area of each triangle.

1)



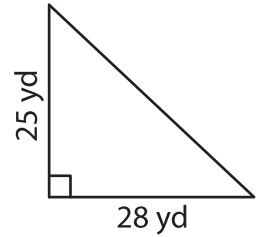
Area = \_\_\_\_\_

2)



Area = \_\_\_\_\_

3)



B) Find the area of each triangle.

4) base = 51 ft , height = 4

4 in

Area = \_\_\_\_\_

6) base = 29 yd , height = 3

3 ft

Area = \_\_\_\_\_

8) The height and base of triangle.

determine the area of the

**PREVIEW**

Gain complete access to the largest collection of worksheets in all subjects!

Members, please log in to download this worksheet.

Not a member? Please sign up to gain complete access.

[www.mathworksheets4kids.com](http://www.mathworksheets4kids.com)

9) Find the area of a triangle whose base is 27 yards and height is 36 yards.

\_\_\_\_\_