

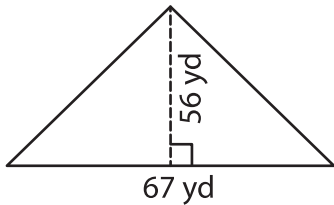
Name : _____

T2L2S3

Area of a Triangle

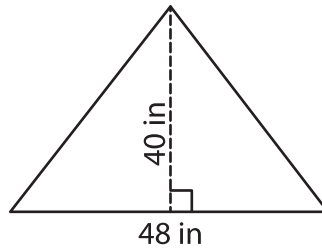
A) Find the area of each triangle.

1)



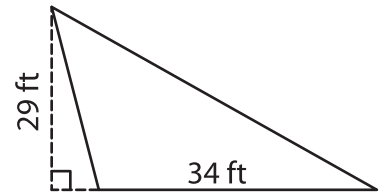
Area = _____

2)



Area = _____

3)



B) Find the area of each triangle.

4) base = 23 in , height = 2

Area = _____

6) base = 37 ft , height = 4

Area = _____

8) The base of a triangle is

9) Determine the area of a triangle, if the base and height of the triangle are 61 feet and 64 feet respectively.

PREVIEW

Gain complete access to the largest collection of worksheets in all subjects!

Members, please log in to download this worksheet.

Not a member? Please sign up to gain complete access.

www.mathworksheets4kids.com