

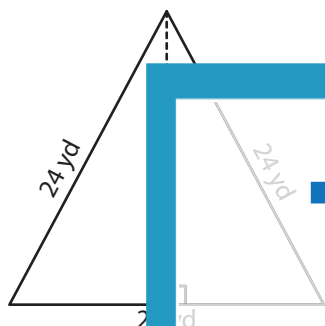
Name : _____

T2S5

Area of an Isosceles Triangle

Find the area of each isosceles triangle. Round your answer to two decimal places.

1)



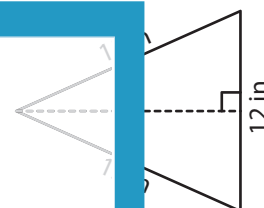
Area = _____

2)



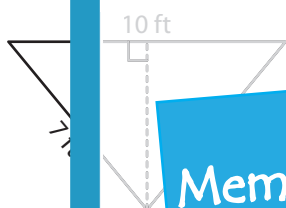
Area = _____

3)



Area = _____

4)



Area = _____

7) The length of each equal side of an isosceles triangle is 13 ft. Find the area if the base measures 13 ft.

Members, please log in to download this worksheet.

Not a member? Please sign up to gain complete access.

www.mathworksheets4kids.com

8) The base of an isosceles triangle measures 30 yards. What is the area of the isosceles triangle if the two equal sides measure 39 yards each?