


Name : \_\_\_\_\_

## Area of a Right Triangle

Sheet 1

Find the area of each right triangle.

1)



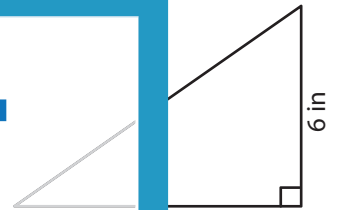
Area = \_\_\_\_\_

2)

12 ft

Area = \_\_\_\_\_

3)



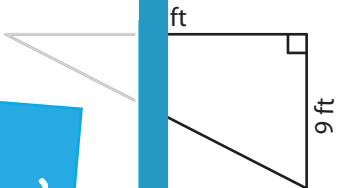
Area = \_\_\_\_\_

4)



Area = \_\_\_\_\_

- 7) Mary made a flag in the shape of a right triangle. The shorter sides of the flag were 12 inches and 16 inches. What is the area of the flag?



Area = \_\_\_\_\_

- 8) By installing a right triangular panel, Erica transformed the space under the stairs into a hidden alcove. She then gave the panel a fresh coat of paint. If the two shorter sides of the panel measured 9 feet and 12 feet, how much area did Erica paint?

# PREVIEW

Gain complete access to the largest collection of worksheets in all subjects!

Members, please log in to download this worksheet.

Not a member? Please sign up to gain complete access.

[www.mathworksheets4kids.com](http://www.mathworksheets4kids.com)