

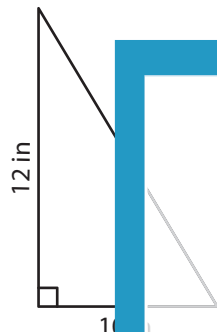
Name : _____

Area of a Right Triangle

Sheet 3

Find the area of each right triangle.

1)




Area = _____

2)



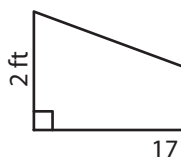
Area = _____

3)



Area = _____

4)



Area = _____

- 7) Jamie decided to plant tomatoes in a right triangle. The two shorter sides measured 3 yd and 4 yd. How much area will Jamie use?

- 8) Frank designed a model sailboat and attached a piece of fabric to the mast. The two shorter sides of the fabric formed a right triangle and measured 5 inches and 12 inches. How much fabric did Frank use?

PREVIEW

Gain complete access to the largest collection of worksheets in all subjects!

Members, please log in to download this worksheet.

Not a member? Please sign up to gain complete access.

www.mathworksheets4kids.com