

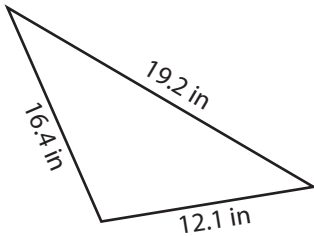
Name : _____

Area of a Scalene Triangle

T2S4

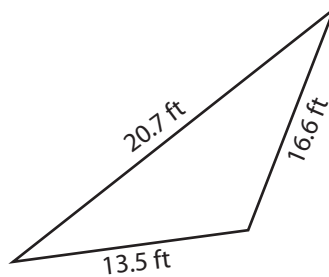
A) Find the area of each scalene triangle. Round your answer to two decimal places.

1)



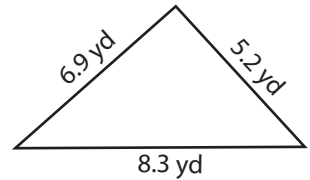
Area = _____

2)



Area = _____

3)



B) Find the area of each scalene triangle. Round your answer to two decimal places.

4) $a = 10.3$ ft, $b = 11.7$ ft, $c = 12.5$ ft

Area = _____

6) $a = 16.5$ yd, $b = 13.9$ yd, $c = 10.6$ yd

Area = _____

8) What is the area of the scalene triangle with side lengths 7.3 inches and 16.7 inches?

9) The sides of a scalene triangle measure 4.9 yards, 7.5 yards and 8.1 yards. Find the area.

PREVIEW

Gain complete access to the largest collection of worksheets in all subjects!

Members, please log in to download this worksheet.

Not a member? Please sign up to gain complete access.

www.mathworksheets4kids.com

Name : _____

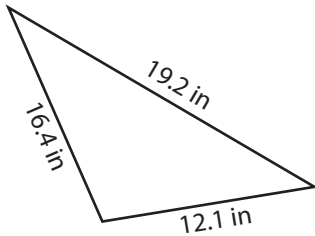
Answer key

Area of a Scalene Triangle

T2S4

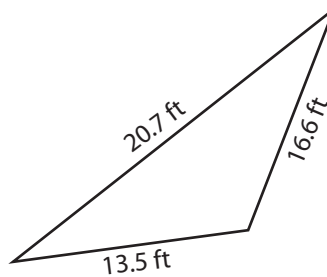
A) Find the area of each scalene triangle. Round your answer to two decimal places.

1)



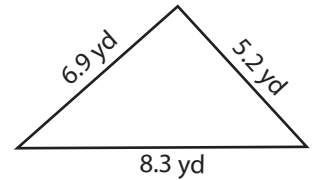
Area = 98.53 in²

2)



Area = 58.13 ft²

3)



Area = 17.88 yd²

B) Find the area of each scalene triangle. Round your answer to two decimal places.

4) a = 10.3 ft, b = 11.7 ft, c = 13.5 ft

Area = 58.13 ft²

6) a = 16.5 yd, b = 13.9 yd, c = 10.6 yd

Area = 101.19 yd²

8) What is the area of the scalene triangle with sides 7.3 inches and 16.7 inches?

135.36 square inches

9) The sides of a scalene triangle measure 4.9 yards, 7.5 yards and 8.1 yards. Find the area.

18.01 square yards

PREVIEW

Gain complete access to the largest collection of worksheets in all subjects!

Members, please log in to download this worksheet.

Not a member? Please sign up to gain complete access.

www.mathworksheets4kids.com