

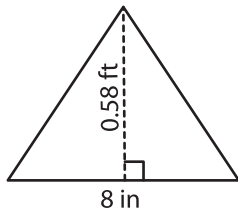
Name : _____

T1S4

Area of a Triangle

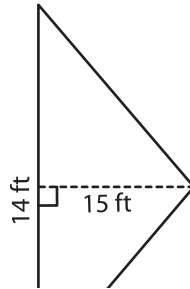
Find the area of each triangle.

1)



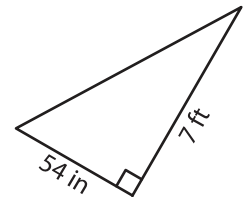
Area = _____

2)

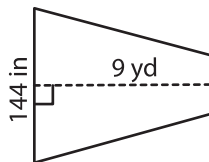


Area = _____ ft²

3)



4)



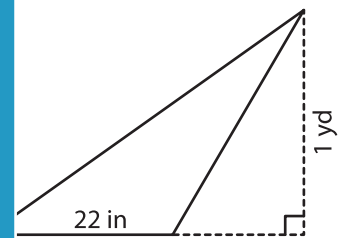
Area = _____

PREVIEW
Gain complete access to the largest collection of worksheets in all subjects!

Members, please log in to download this worksheet.

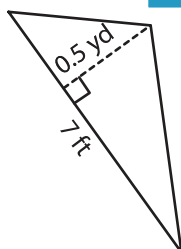
Not a member? Please sign up to gain complete access.

www.mathworksheets4kids.com

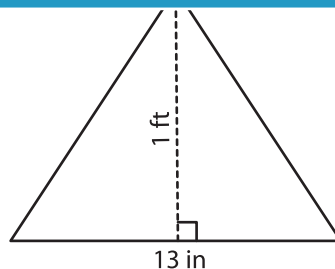


Area = _____ in²

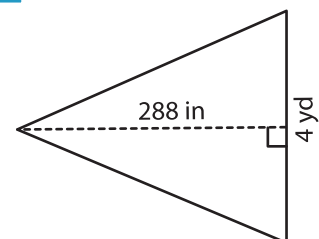
7)



Area = _____ ft²



Area = _____ in²



Area = _____ yd²