

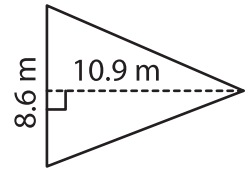
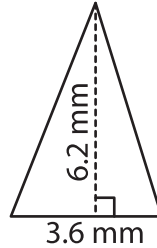
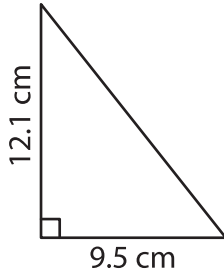
Name : _____

T2S1

Area of a Triangle

A) Find the area of each triangle. Round your answer to two decimal places.

1) 2) 3)



Area = _____

Area = _____

B) Find the area of each triangle.

Round your answer to two decimal places.

4) base = 5.2 mm , height = 2.6 m

2.6 m

Area = _____

6) base = 7.1 cm , height = 4.1 mm

= 4.1 mm

Area = _____

8) The height of a triangle is 11.8 m?

is 11.8 m?

PREVIEW

Gain complete access to the largest collection of worksheets in all subjects!

Members, please log in to download this worksheet.

Not a member? Please sign up to gain complete access.

www.mathworksheets4kids.com

9) Determine the area of a triangle, if the base and height of the triangle are 8.2 cm and 6.5 cm respectively.
