

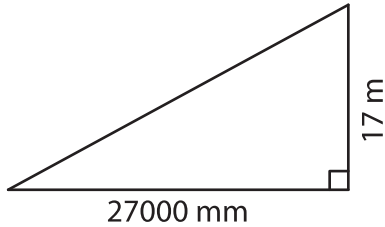
Name : _____

T2S1

Area of a Triangle

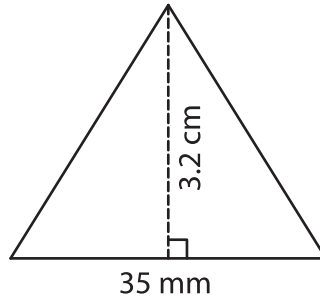
A) Find the area of each triangle.

1)



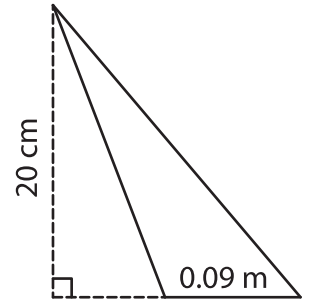
Area = _____

2)



35 mm

3)



Area = _____ cm²

B) Find the area of each triangle.

4) base = 18 cm , height = _____

_____ = 15.2 m

Area = _____

_____ m²

6) base = 0.005 m , height = _____

690 mm

Area = _____

_____ cm²

8) Find the area of a triangle with base _____ and height _____

_____ cm²

9) The height and base of a triangle are 31 m and 4,800 cm respectively. Determine the area of the triangle.

_____ m²

PREVIEW

Gain complete access to the largest collection of worksheets in all subjects!

Members, please log in to download this worksheet.

Not a member? Please sign up to gain complete access.

www.mathworksheets4kids.com