

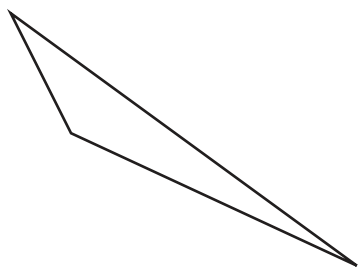
Name : _____

Identifying Triangles

Angles: S3

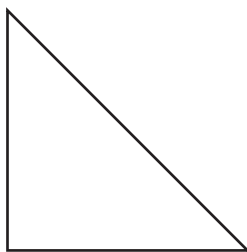
Identify each triangle based on angles. (Acute, Obtuse or Right)

1)



Obtuse triangle

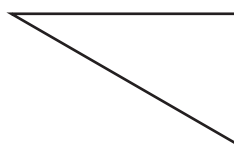
2)



3)



4)



PREVIEW

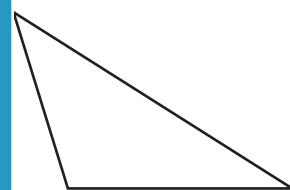
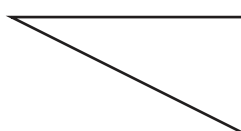
Gain complete access to the largest collection of worksheets in all subjects!

Members, please log in to download this worksheet.

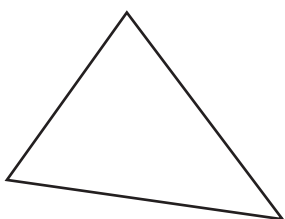
Not a member? Please sign up to gain complete access.

www.mathworksheets4kids.com

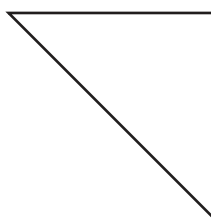
7)



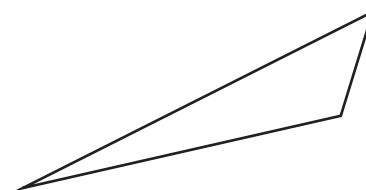
10)



11)



12)



Name : _____

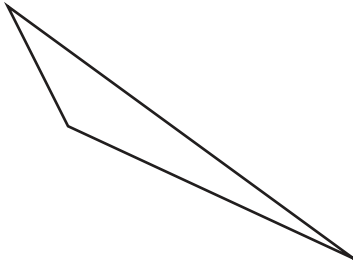
Answer key

Identifying Triangles

Angles: S3

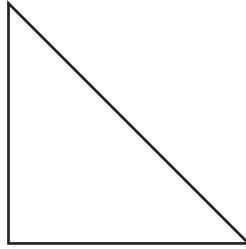
Identify each triangle based on angles. (Acute, Obtuse or Right)

1)



Obtuse triangle

2)



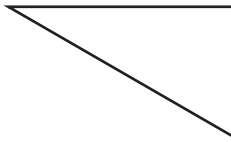
Right triangle

3)



Acute triangle

4)



Acute triangle

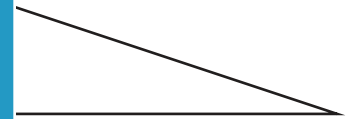
PREVIEW

Gain complete access to the largest collection of worksheets in all subjects!

Members, please log in to download this worksheet.

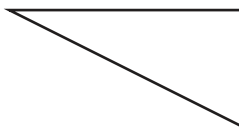
Not a member? Please sign up to gain complete access.

www.mathworksheets4kids.com

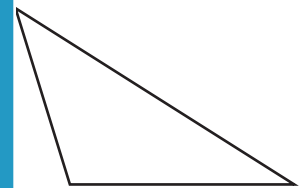


Right triangle

7)

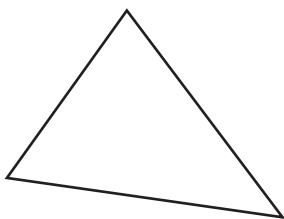


Right triangle



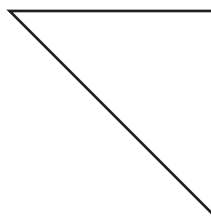
Obtuse triangle

10)



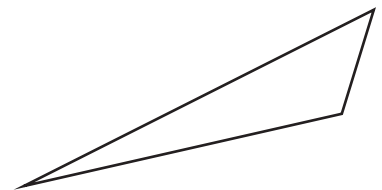
Acute triangle

11)



Right triangle

12)



Obtuse triangle