

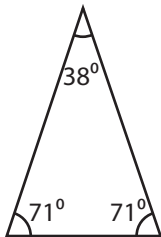
Name : _____

Identifying Triangles

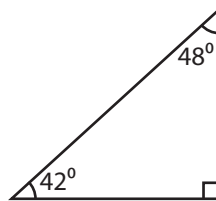
Angles - Numerals: S1

Identify each triangle based on angles. (Acute, Obtuse or Right)

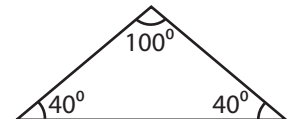
1)



2)

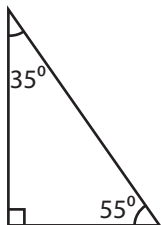


3)



Acute triangle

4)



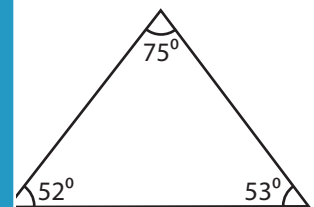
PREVIEW

Gain complete access to the largest collection of worksheets in all subjects!

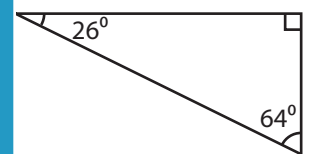
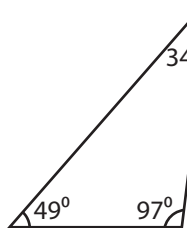
Members, please log in to download this worksheet.

Not a member? Please sign up to gain complete access.

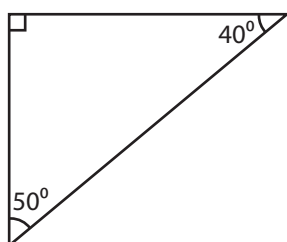
www.mathworksheets4kids.com



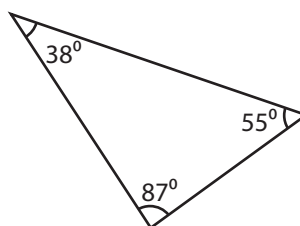
7)



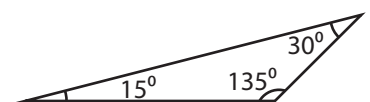
10)



11)



12)



Name : _____

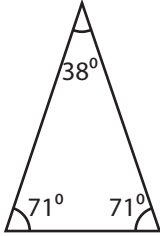
Answer key

Identifying Triangles

Angles - Numerals: S1

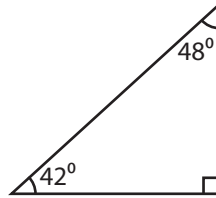
Identify each triangle based on angles. (Acute, Obtuse or Right)

1)



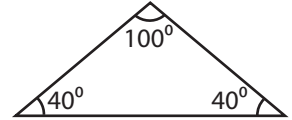
Acute triangle

2)



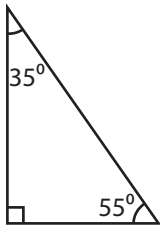
Right triangle

3)



Obtuse triangle

4)



Right triangle

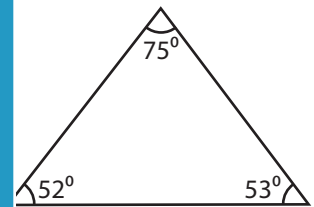
PREVIEW

Gain complete access to the largest collection of worksheets in all subjects!

Members, please log in to download this worksheet.

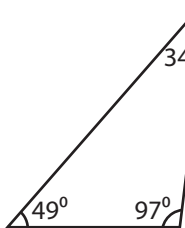
Not a member? Please sign up to gain complete access.

www.mathworksheets4kids.com

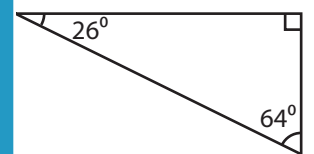


Acute triangle

7)

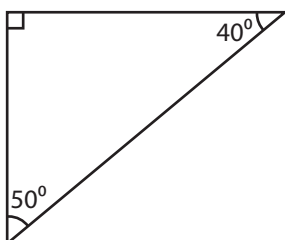


Obtuse triangle



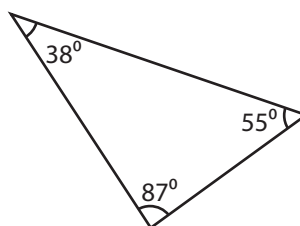
Right triangle

10)



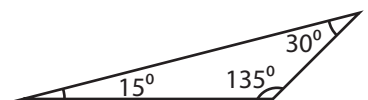
Right triangle

11)



Acute triangle

12)



Obtuse triangle