

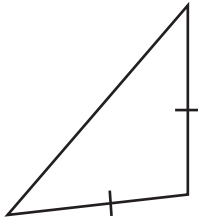
Name : _____

Identifying Triangles

Angles or Sides: S1

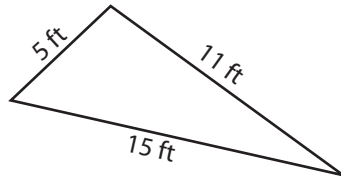
Identify each triangle based on angles or sides.

1)

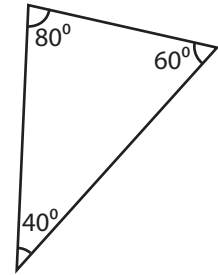


Isosceles triangle

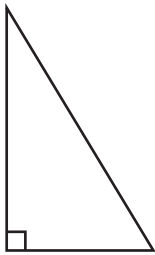
2)



3)



4)



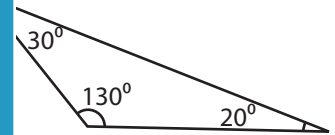
PREVIEW

Gain complete access to the largest collection of worksheets in all subjects!

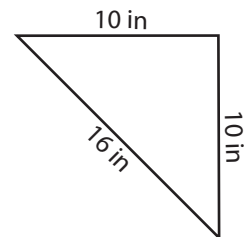
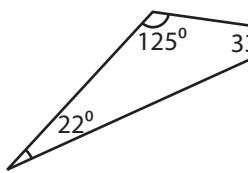
Members, please log in to download this worksheet.

Not a member? Please sign up to gain complete access.

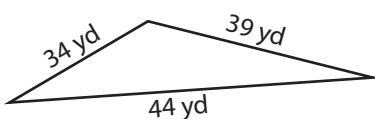
www.mathworksheets4kids.com



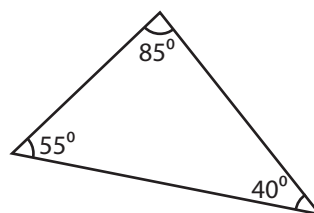
7)



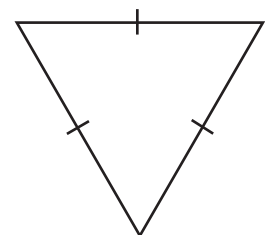
10)



11)



12)



Name : _____

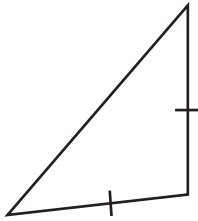
Answer key

Identifying Triangles

Angles or Sides: S1

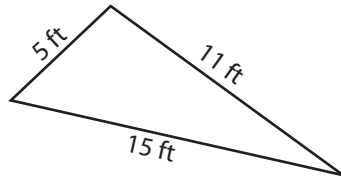
Identify each triangle based on angles or sides.

1)



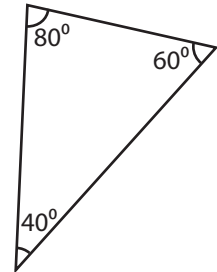
Isosceles triangle

2)



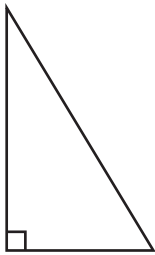
Scalene triangle

3)



Acute triangle

4)



Right triangle

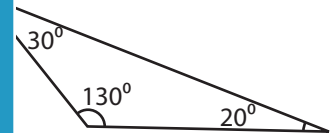
PREVIEW

Gain complete access to the largest collection of worksheets in all subjects!

Members, please log in to download this worksheet.

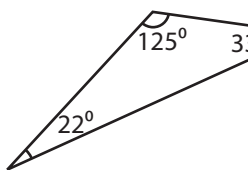
Not a member? Please sign up to gain complete access.

www.mathworksheets4kids.com

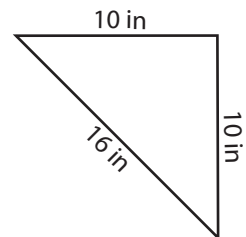


Obtuse triangle

7)

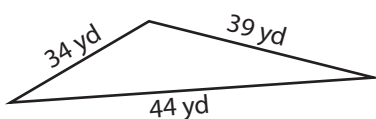


Obtuse triangle



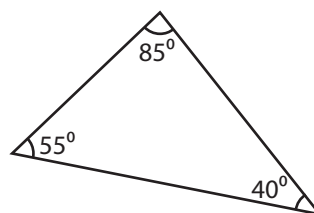
Isosceles triangle

10)



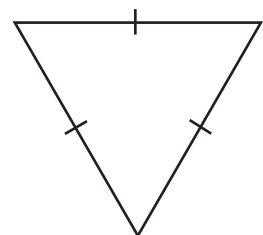
Scalene triangle

11)



Acute triangle

12)



Equilateral triangle