

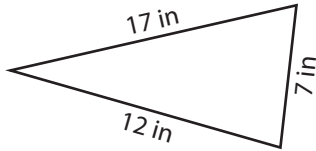
Name : _____

Identifying Triangles

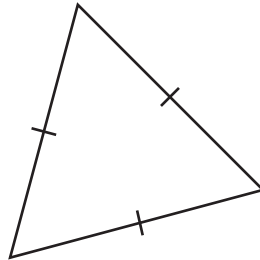
Angles or Sides: S2

Identify each triangle based on angles or sides.

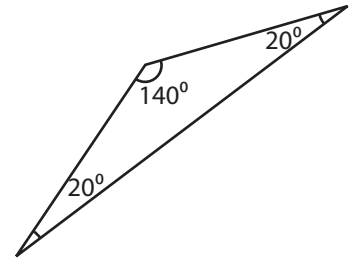
1)



2)

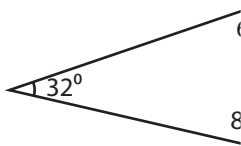


3)



Scalene triangle

4)



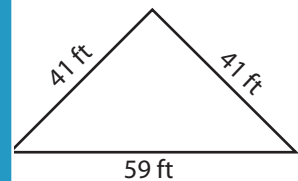
PREVIEW

Gain complete access to the largest collection of worksheets in all subjects!


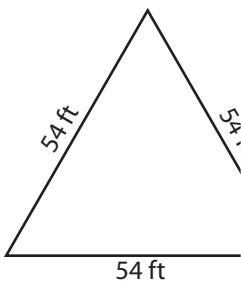
Members, please log in to download this worksheet.

Not a member? Please sign up to gain complete access.

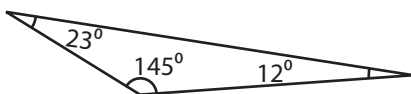
www.mathworksheets4kids.com



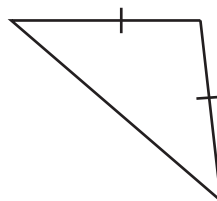
7)



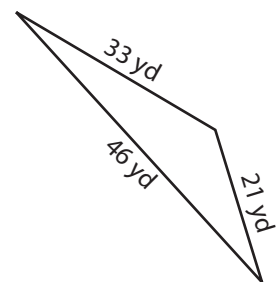
10)



11)



12)



Name : _____

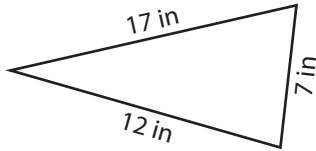
Answer key

Identifying Triangles

Angles or Sides: S2

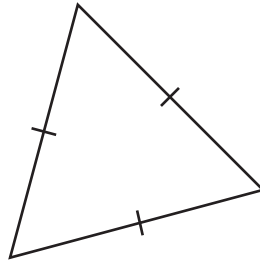
Identify each triangle based on angles or sides.

1)



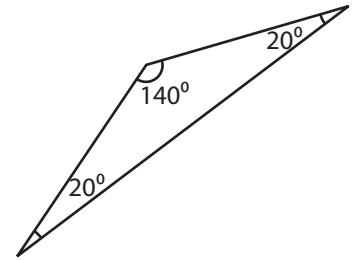
Scalene triangle

2)



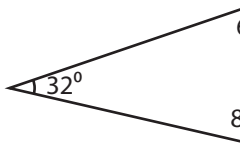
Equilateral triangle

3)



Obtuse triangle

4)



Acute triangle

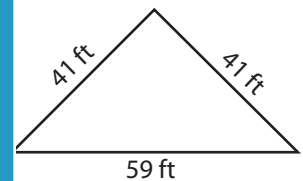
PREVIEW

Gain complete access to the largest collection of worksheets in all subjects!

Members, please log in to download this worksheet.

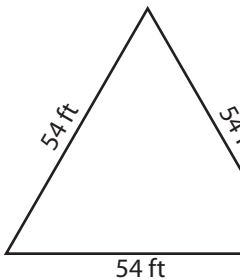
Not a member? Please sign up to gain complete access.

www.mathworksheets4kids.com



Isosceles triangle

7)

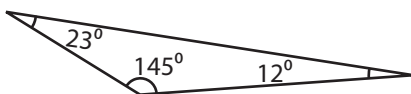


Equilateral triangle



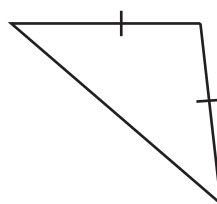
Right triangle

10)



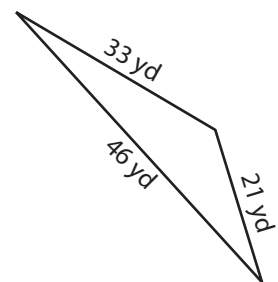
Obtuse triangle

11)



Isosceles triangle

12)



Scalene triangle