

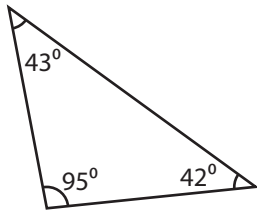
Name : _____

Identifying Triangles

Angles or Sides: S3

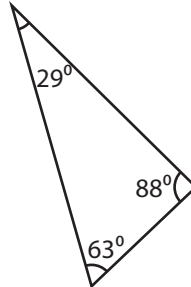
Identify each triangle based on angles or sides.

1)

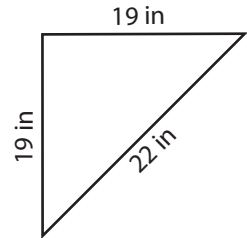


Obtuse triangle

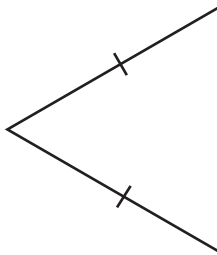
2)



3)

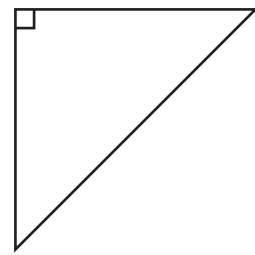


4)

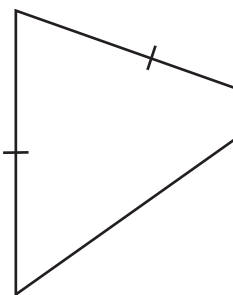


PREVIEW

Gain complete access to the largest collection of worksheets in all subjects!



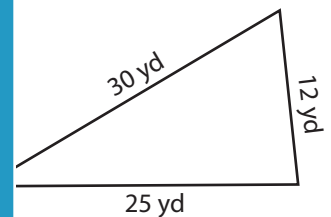
7)



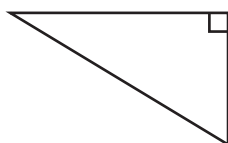
Members, please log in to download this worksheet.

Not a member? Please sign up to gain complete access.

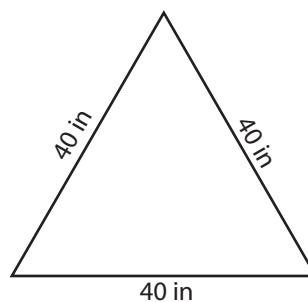
www.mathworksheets4kids.com



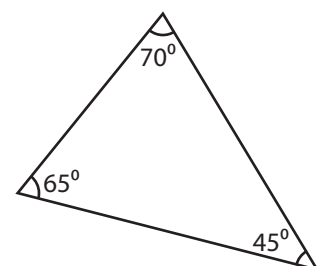
10)



11)



12)



Name : _____

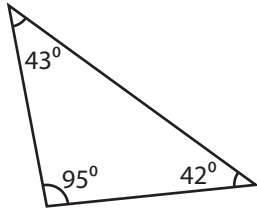
Answer key

Identifying Triangles

Angles or Sides: S3

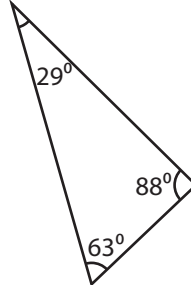
Identify each triangle based on angles or sides.

1)



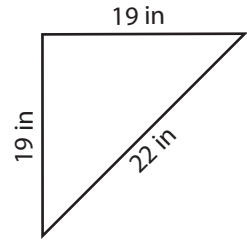
Obtuse triangle

2)



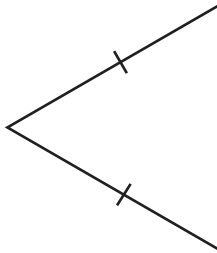
Acute triangle

3)



Isosceles triangle

4)



Equilateral triangle

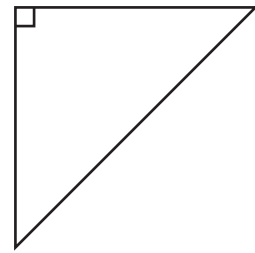
PREVIEW

Gain complete access to the largest collection of worksheets in all subjects!

Members, please log in to download this worksheet.

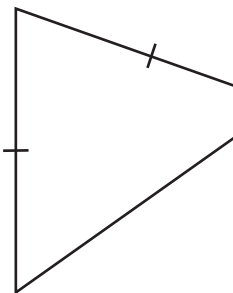
Not a member? Please sign up to gain complete access.

www.mathworksheets4kids.com

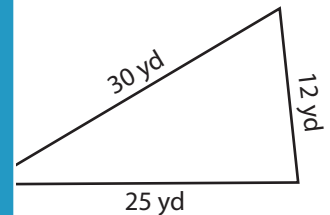


Right triangle

7)

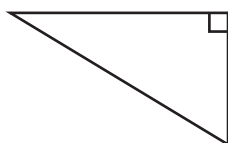


Isosceles triangle



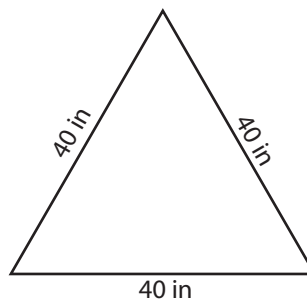
Scale triangle

10)



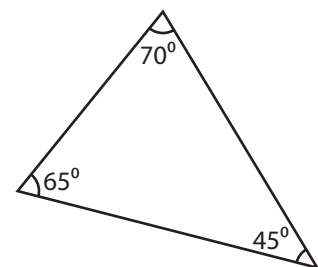
Right triangle

11)



Equilateral triangle

12)



Acute triangle