

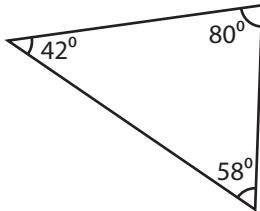
Name : _____

Identifying Triangles

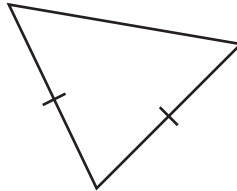
Angles or Sides: S4

Identify each triangle based on angles or sides.

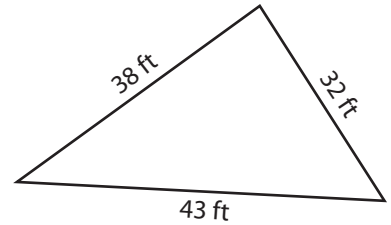
1)



2)

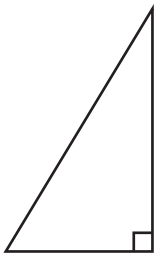


3)



Acute triangle

4)



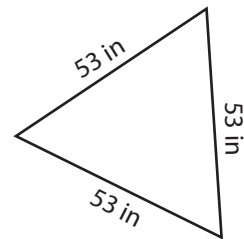
PREVIEW

Gain complete access to the largest collection of worksheets in all subjects!

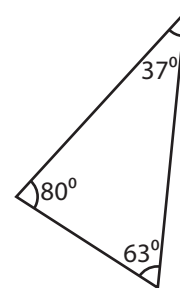
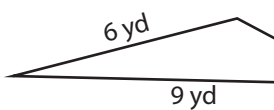
Members, please log in to download this worksheet.

Not a member? Please sign up to gain complete access.

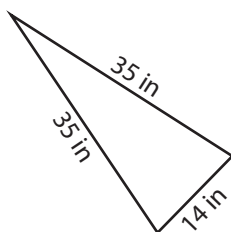
www.mathworksheets4kids.com



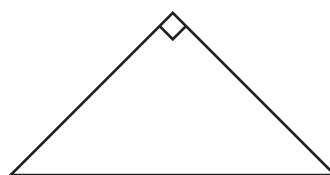
7)



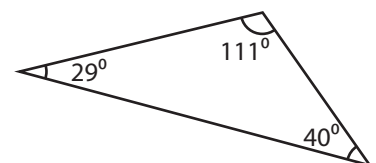
10)



11)



12)



Name : _____

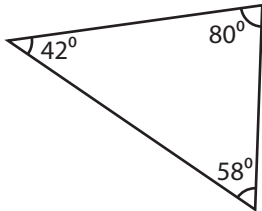
Answer key

Identifying Triangles

Angles or Sides: S4

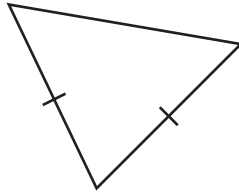
Identify each triangle based on angles or sides.

1)



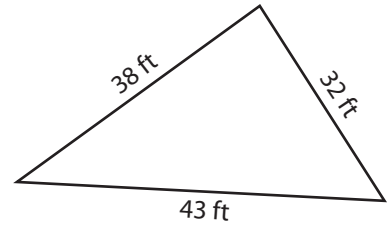
Acute triangle

2)



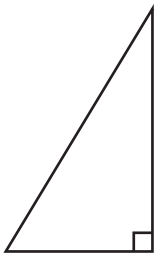
Isosceles triangle

3)



Scalene triangle

4)



Right triangle

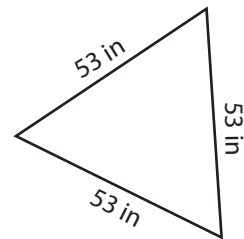
PREVIEW

Gain complete access to the largest collection of worksheets in all subjects!

Members, please log in to download this worksheet.

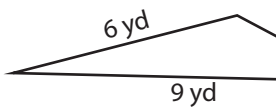
Not a member? Please sign up to gain complete access.

www.mathworksheets4kids.com

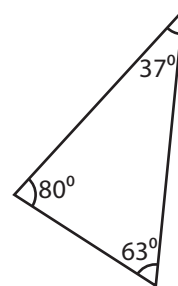


Equilateral triangle

7)

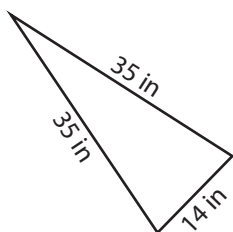


Scalene triangle



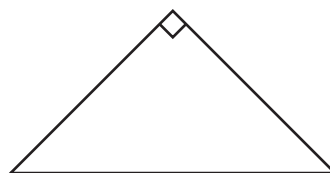
Acute triangle

10)



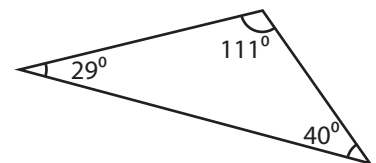
Isosceles triangle

11)



Right triangle

12)



Obtuse triangle