

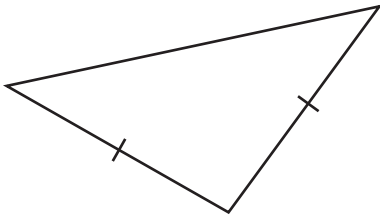
Name : \_\_\_\_\_

## Identifying Triangles

Angles or Sides: S5

Identify each triangle based on angles or sides.

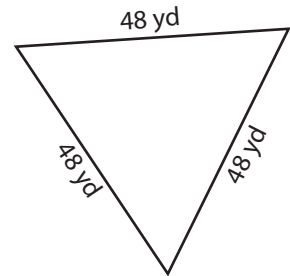
1)



2)

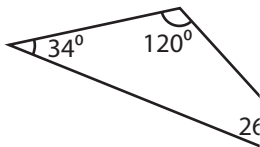


3)



Isosceles triangle

4)



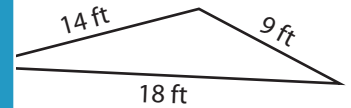
# PREVIEW

Gain complete access to the largest collection of worksheets in all subjects!

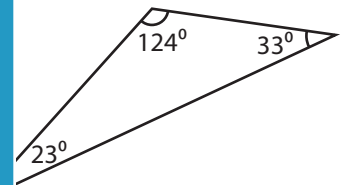
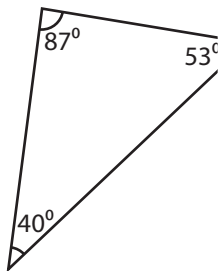
Members, please log in to download this worksheet.

Not a member? Please sign up to gain complete access.

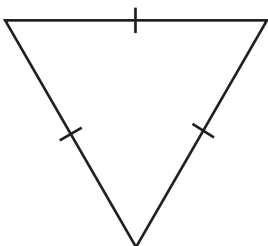
[www.mathworksheets4kids.com](http://www.mathworksheets4kids.com)



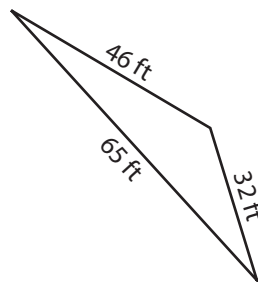
7)



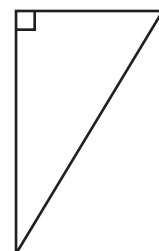
10)



11)



12)



Name : \_\_\_\_\_

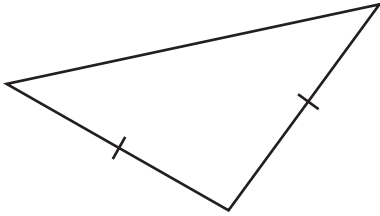
**Answer key**

**Identifying Triangles**

Angles or Sides: S5

Identify each triangle based on angles or sides.

1)



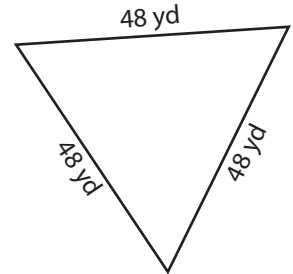
**Isosceles triangle**

2)



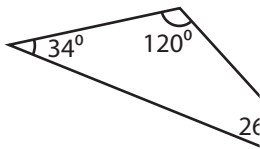
**Right triangle**

3)



**Equilateral triangle**

4)



**Obtuse triangle**

**PREVIEW**

Gain complete access to the largest collection of worksheets in all subjects!

Members, please log in to download this worksheet.

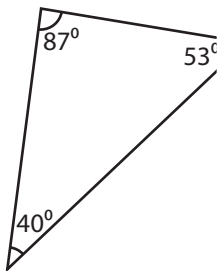
Not a member? Please sign up to gain complete access.

[www.mathworksheets4kids.com](http://www.mathworksheets4kids.com)

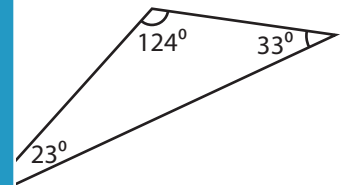


**Scalene triangle**

7)

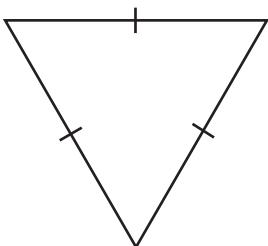


**Acute triangle**



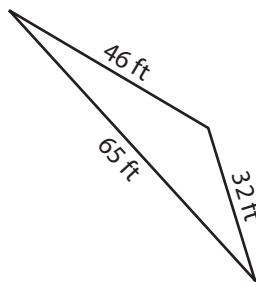
**Obtuse triangle**

10)



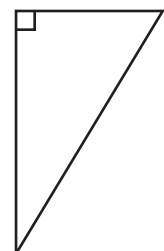
**Equilateral triangle**

11)



**Scalene triangle**

12)



**Right triangle**