

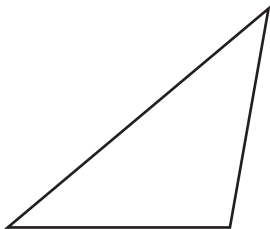
Name : \_\_\_\_\_

## Identifying Triangles

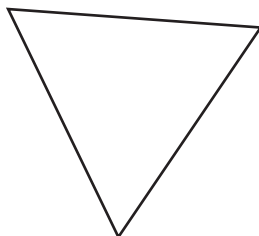
Sides: S2

Identify each triangle based on sides. (Equilateral, Isosceles or Scalene)

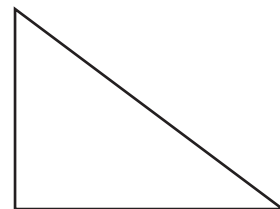
1)



2)

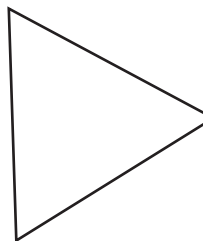


3)



Isosceles triangle

4)



# PREVIEW

Gain complete access to the largest collection of worksheets in all subjects!

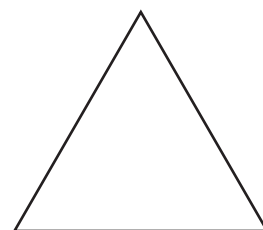
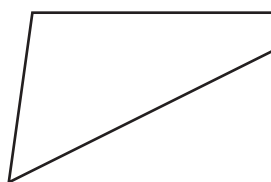
Members, please log in to download this worksheet.

Not a member? Please sign up to gain complete access.

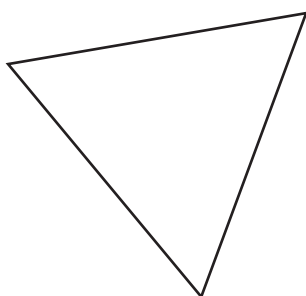
[www.mathworksheets4kids.com](http://www.mathworksheets4kids.com)



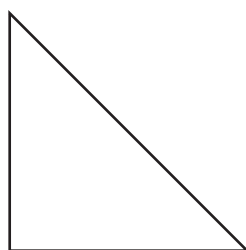
7)



10)



11)



12)



Name : \_\_\_\_\_

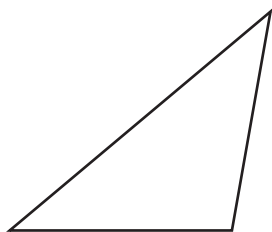
**Answer key**

**Identifying Triangles**

Sides: S2

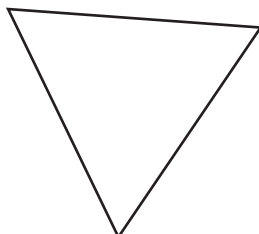
Identify each triangle based on sides. (Equilateral, Isosceles or Scalene)

1)



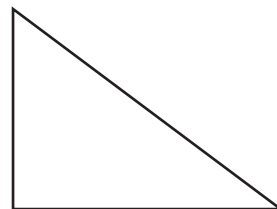
**Isosceles triangle**

2)



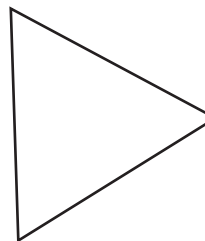
**Equilateral triangle**

3)



**Scalene triangle**

4)



**Equilateral triangle**

**PREVIEW**

Gain complete access to the largest collection of worksheets in all subjects!

Members, please log in to download this worksheet.

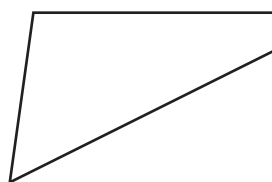
Not a member? Please sign up to gain complete access.

[www.mathworksheets4kids.com](http://www.mathworksheets4kids.com)

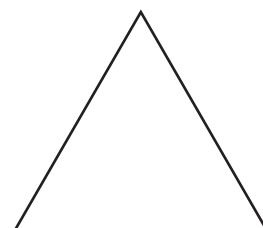


**Isosceles triangle**

7)

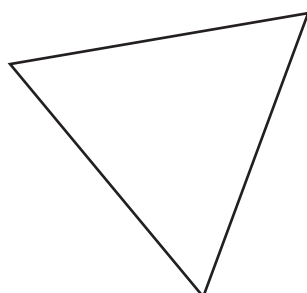


**Scalene triangle**



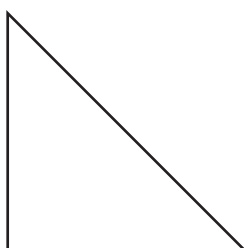
**Equilateral triangle**

10)



**Equilateral triangle**

11)



**Isosceles triangle**

12)



**Scalene triangle**