


Name : _____

Identifying Triangles

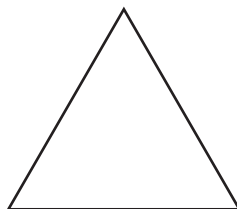
Sides: S4

Identify each triangle based on sides. (Equilateral, Isosceles or Scalene)

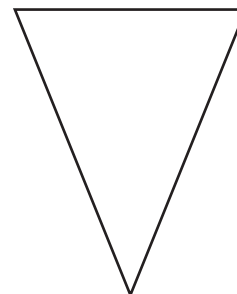
1)



2)

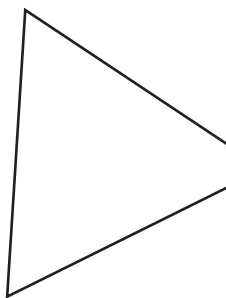


3)



Scalene triangle

4)



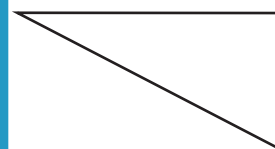
PREVIEW

Gain complete access to the largest collection of worksheets in all subjects!

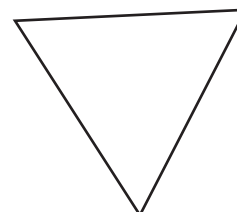
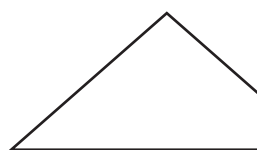
Members, please log in to download this worksheet.

Not a member? Please sign up to gain complete access.


www.mathworksheets4kids.com



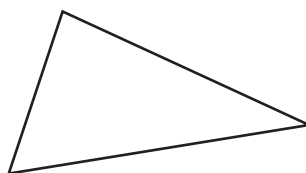
7)




10)



11)



12)



Name : _____

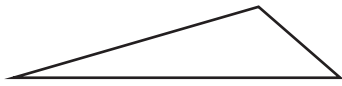
Answer key

Identifying Triangles

Sides: S4

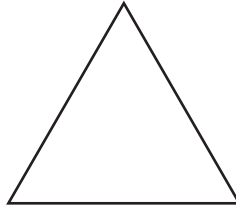
Identify each triangle based on sides. (Equilateral, Isosceles or Scalene)

1)



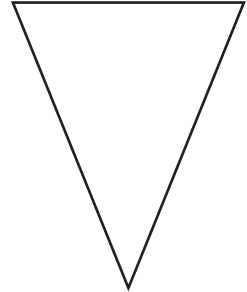
Scalene triangle

2)



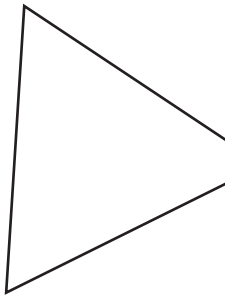
Equilateral triangle

3)



Isosceles triangle

4)



Equilateral trian

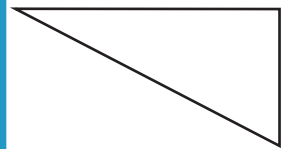
PREVIEW

Gain complete access to the largest collection of worksheets in all subjects!

Members, please log in to download this worksheet.

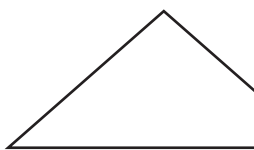
Not a member? Please sign up to gain complete access.

www.mathworksheets4kids.com

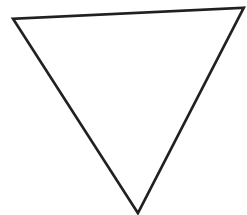


Scalene triangle

7)




Isosceles triang



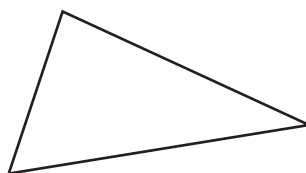
Equilateral triangle

10)




Equilateral triangle

11)



Scalene triangle

12)



Isosceles triangle