

Name : _____

Identifying Triangles

Sides: S5

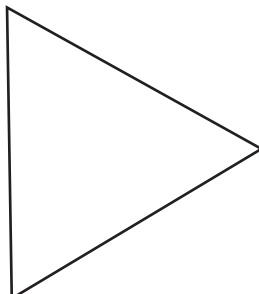
Identify each triangle based on sides. (Equilateral, Isosceles or Scalene)

1)

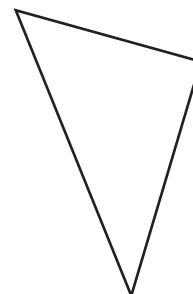


Isosceles triangle

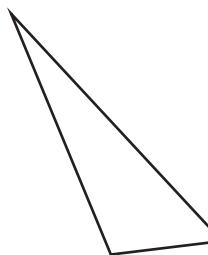
2)



3)



4)



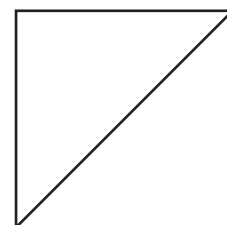
PREVIEW

Gain complete access to the largest collection of worksheets in all subjects!

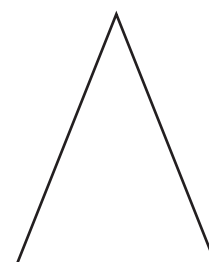
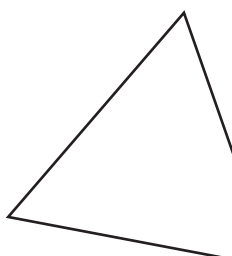
Members, please log in to download this worksheet.

Not a member? Please sign up to gain complete access.

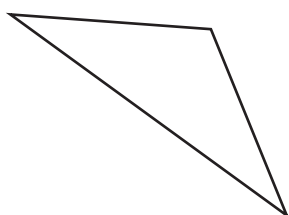
www.mathworksheets4kids.com




7)



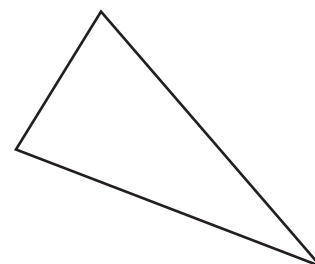
10)



11)



12)



Name : _____

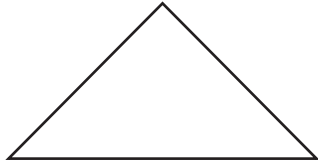
Answer key

Identifying Triangles

Sides: S5

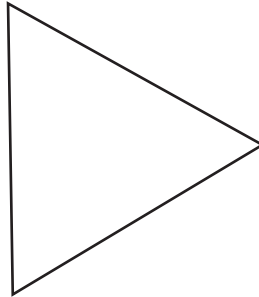
Identify each triangle based on sides. (Equilateral, Isosceles or Scalene)

1)



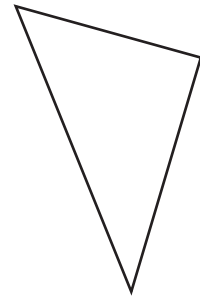
Isosceles triangle

2)



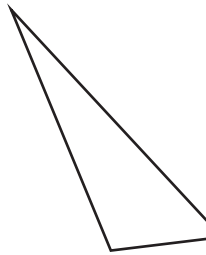
Equilateral triangle

3)



Scalene triangle

4)



Scalene triangle

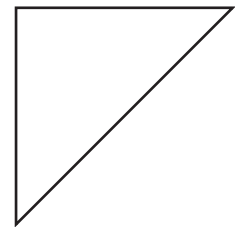
PREVIEW

Gain complete access to the largest collection of worksheets in all subjects!

Members, please log in to download this worksheet.

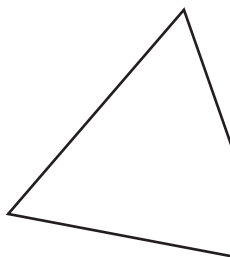
Not a member? Please sign up to gain complete access.

www.mathworksheets4kids.com

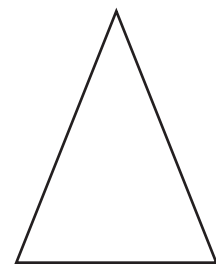


Isosceles triangle

7)

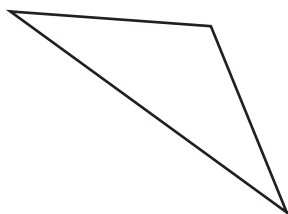


Equilateral triangle




Isosceles triangle

10)



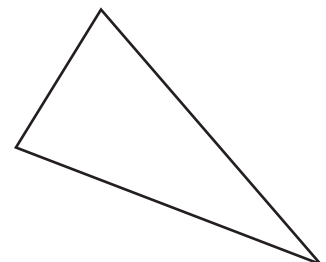
Isosceles triangle

11)



Equilateral triangle

12)



Scalene triangle