

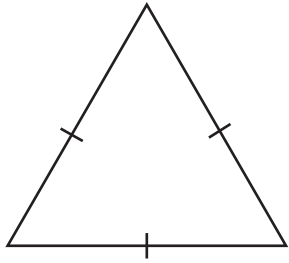
Name : _____

Identifying Triangles

Sheet 1

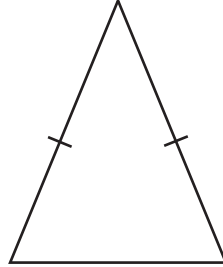
Identify each triangle based on sides. (Equilateral, Isosceles or Scalene)

1)

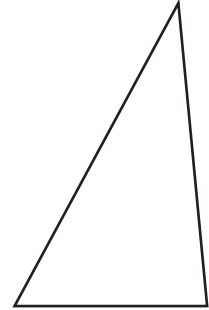


Equilateral triangle

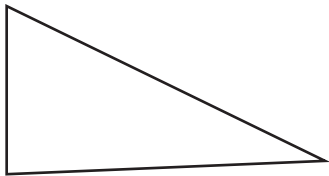
2)



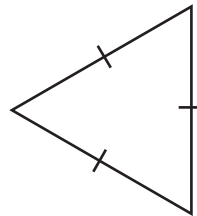
3)



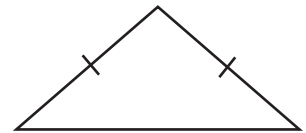
4)



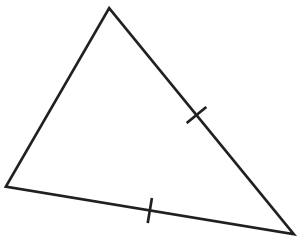
5)



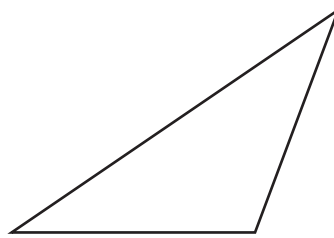
6)



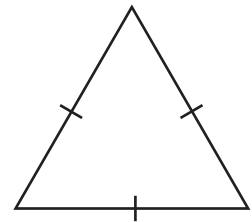
7)



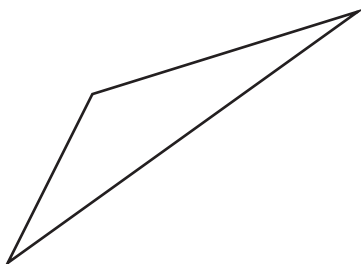
8)



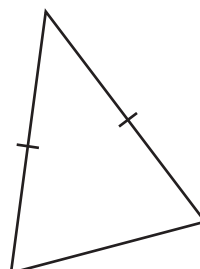
9)



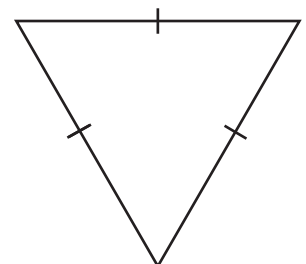
10)



11)



12)



Name : _____

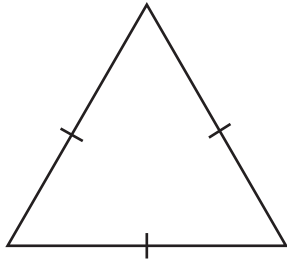
Answer key

Sheet 1

Identifying Triangles

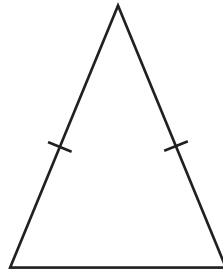
Identify each triangle based on sides. (Equilateral, Isosceles or Scalene)

1)



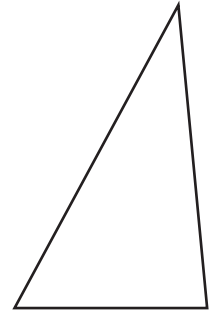
Equilateral triangle

2)



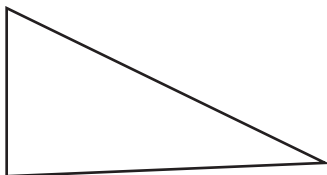
Isosceles triangle

3)



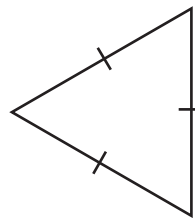
Scalene triangle

4)



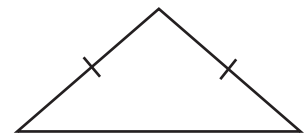
Scalene triangle

5)



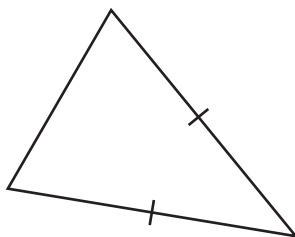
Equilateral triangle

6)



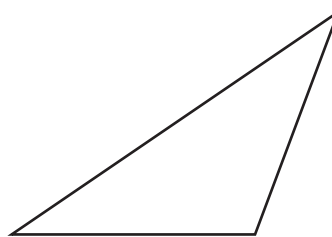
Isosceles triangle

7)



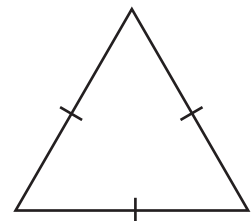
Isosceles triangle

8)



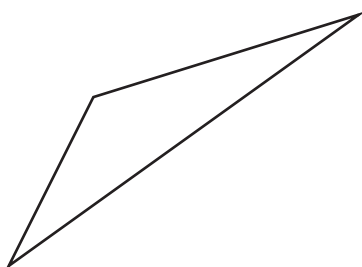
Scalene triangle

9)



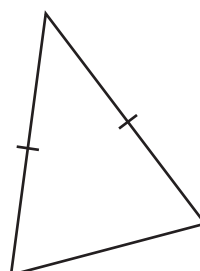
Equilateral triangle

10)



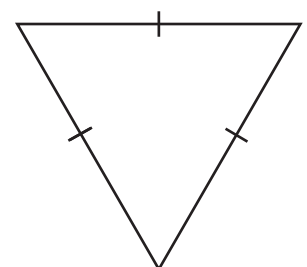
Scalene triangle

11)



Isosceles triangle

12)



Equilateral triangle