

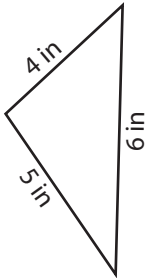
Name : _____

Identifying Triangles

Sides - Numerals: S5

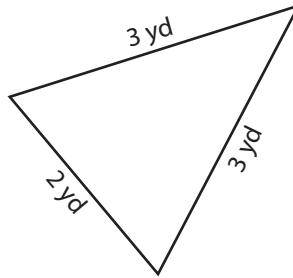
Identify each triangle based on sides. (Equilateral, Isosceles or Scalene)

1)

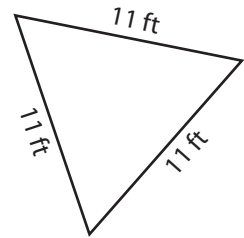


Scalene triangle

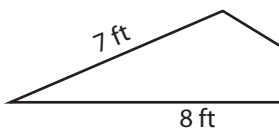
2)



3)



4)



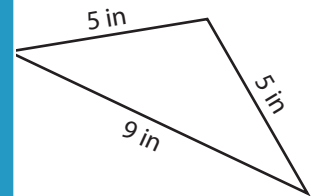
PREVIEW

Gain complete access to the largest collection of worksheets in all subjects!

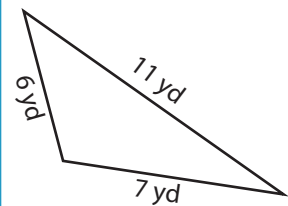
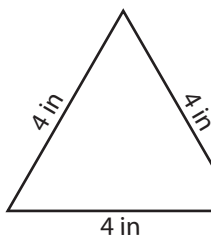
Members, please log in to download this worksheet.

Not a member? Please sign up to gain complete access.

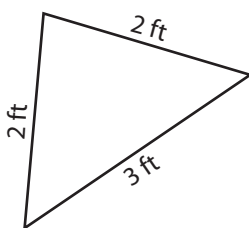
www.mathworksheets4kids.com



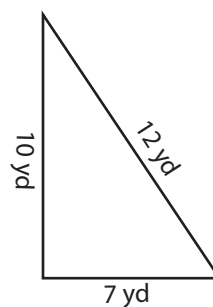
7)



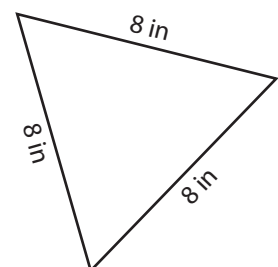
10)



11)



12)



Name : _____

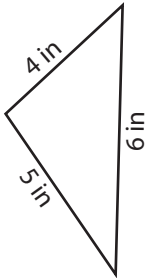
Answer key

Identifying Triangles

Sides - Numerals: S5

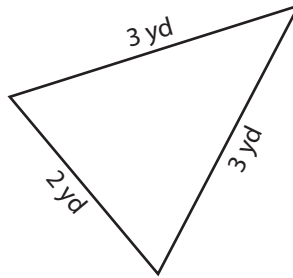
Identify each triangle based on sides. (Equilateral, Isosceles or Scalene)

1)



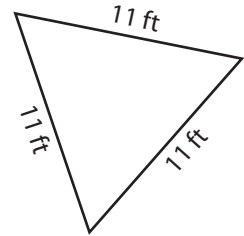
Scalene triangle

2)



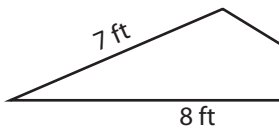
Isosceles triangle

3)



Equilateral triangle

4)



Scalene triangle

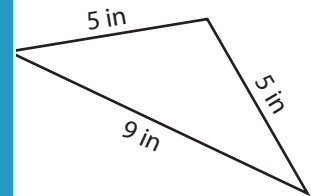
PREVIEW

Gain complete access to the largest collection of worksheets in all subjects!

Members, please log in to download this worksheet.

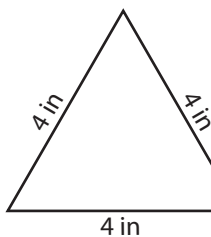
Not a member? Please sign up to gain complete access.

www.mathworksheets4kids.com

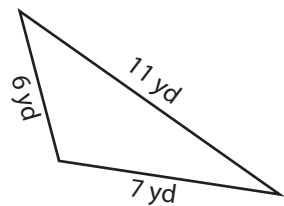


Isosceles triangle

7)

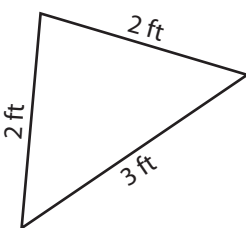


Equilateral triangle



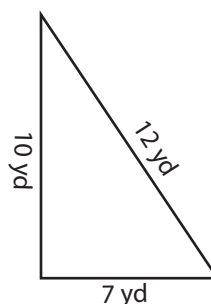
Scalene triangle

10)



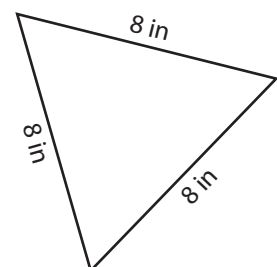
Isosceles triangle

11)



Scalene triangle

12)



Equilateral triangle