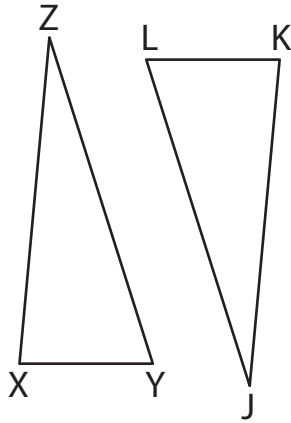


Name : _____

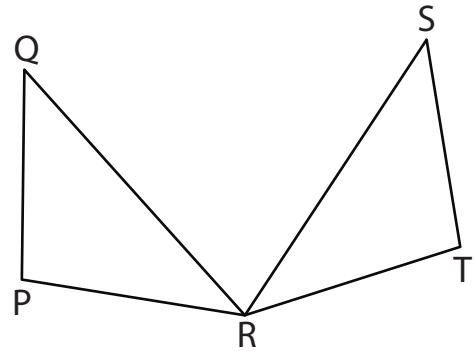
Congruent Triangles

Indicate the corresponding sides and angles for each congruence statement.

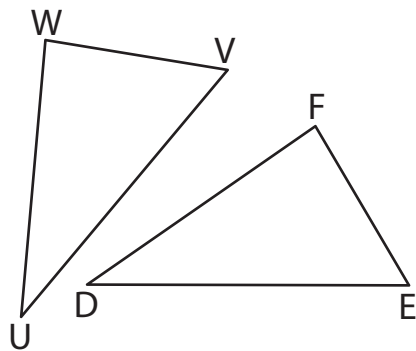
1) $\triangle XYZ \cong \triangle KLJ$



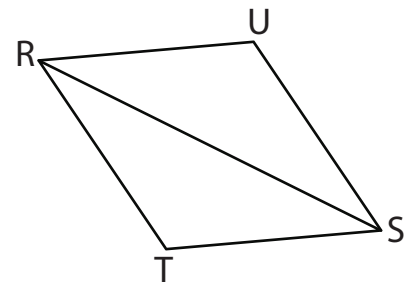
2) $\triangle PQR \cong \triangle TSR$



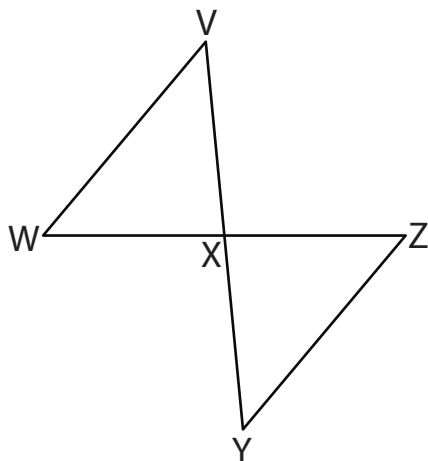
3) $\triangle UVW \cong \triangle DEF$



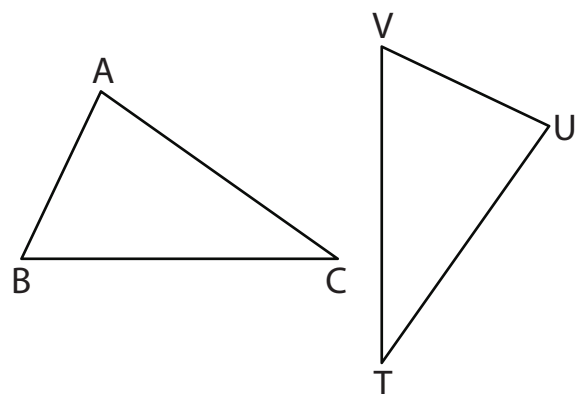
4) $\triangle RST \cong \triangle SRU$



5) $\triangle VWX \cong \triangle YZX$



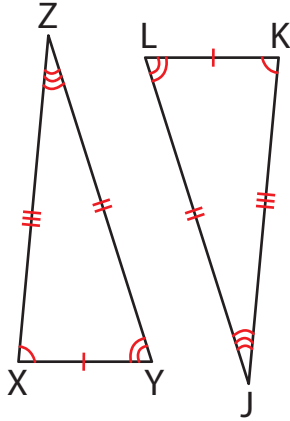
6) $\triangle ABC \cong \triangle UVT$



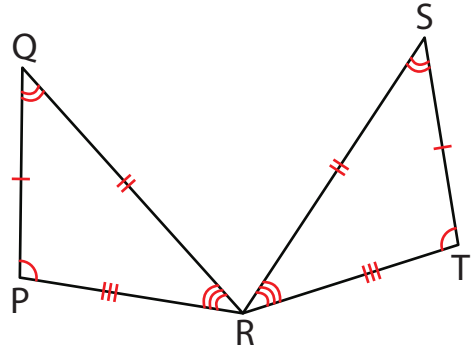
Congruent Triangles

Indicate the corresponding sides and angles for each congruence statement.

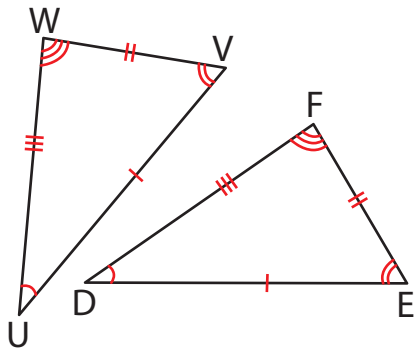
1) $\triangle XYZ \cong \triangle KLJ$



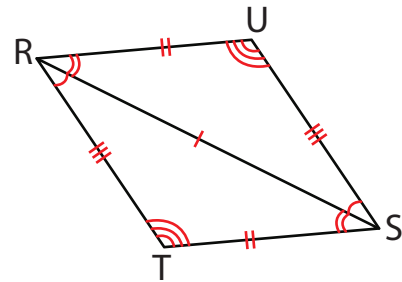
2) $\triangle PQR \cong \triangle TSR$



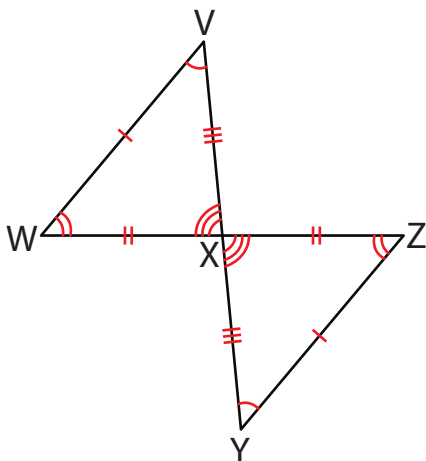
3) $\triangle UVW \cong \triangle DEF$



4) $\triangle RST \cong \triangle SRU$



5) $\triangle VWX \cong \triangle YZX$



6) $\triangle ABC \cong \triangle UVT$

