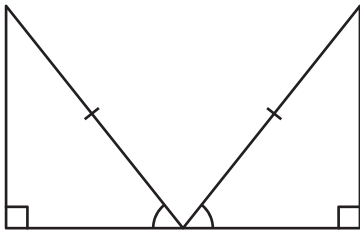


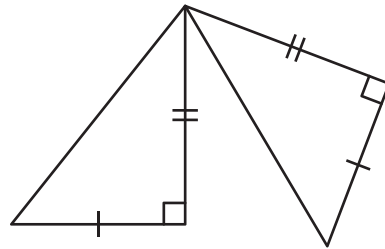
Congruent Triangles

State the postulate to prove each pair of right triangles is congruent.

1)

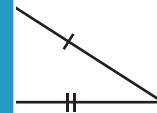


2)

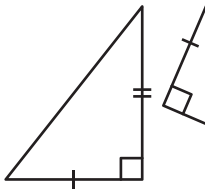


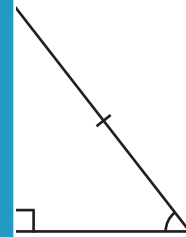
3)





5)





PREVIEW

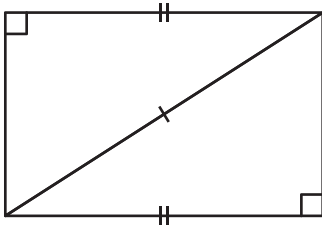
Gain complete access to the largest collection of worksheets in all subjects!

Members, please log in to download this worksheet.

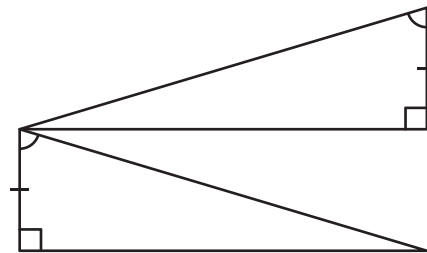
Not a member? Please sign up to gain complete access.

www.mathworksheets4kids.com

7)



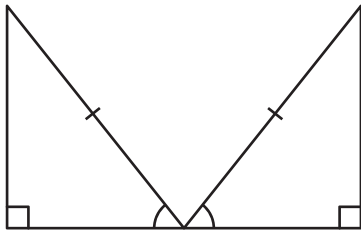
8)



Congruent Triangles

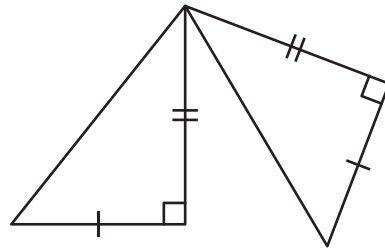
State the postulate to prove each pair of right triangles is congruent.

1)



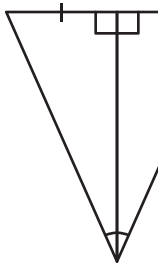
HA

2)

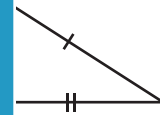


LL

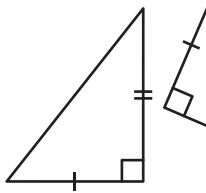
3)



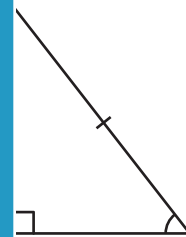
LA



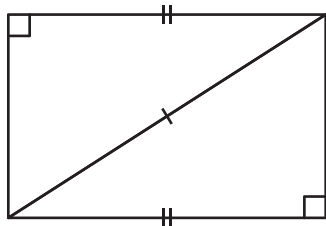
5)



LL

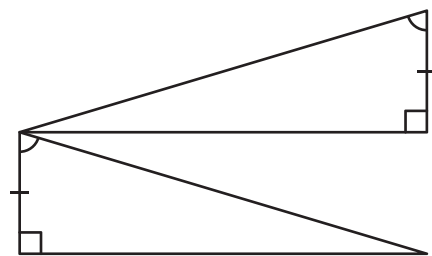


7)



HL

8)



LA

PREVIEW

Gain complete access to the largest collection of worksheets in all subjects!

Members, please log in to download this worksheet.

Not a member? Please sign up to gain complete access.

www.mathworksheets4kids.com